

ATOMIC ENERGY CENTRAL SCHOOL No.-4,RAWATBHATA

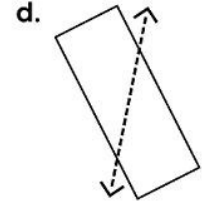
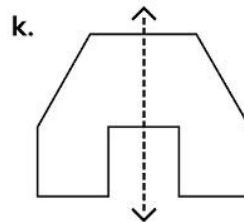
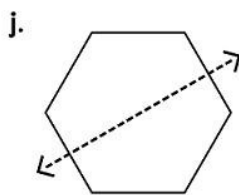
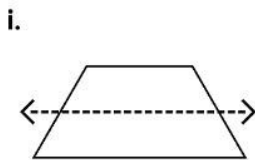
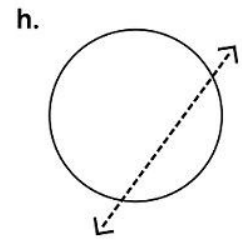
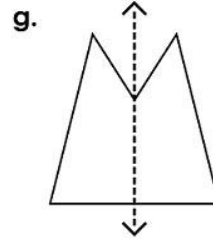
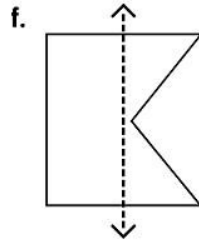
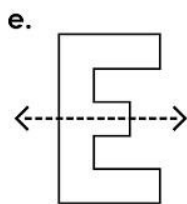
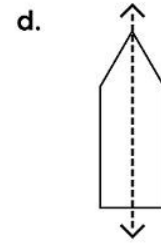
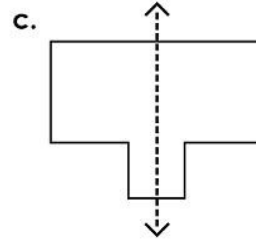
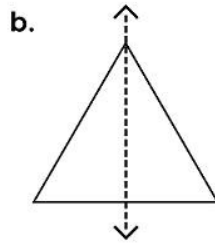
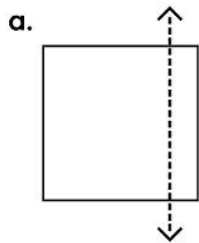
WORKSHEET(Term-1)

CLASS-III

SUBJECT-MATHEMATICS

NAME-_____ Roll No.-_____

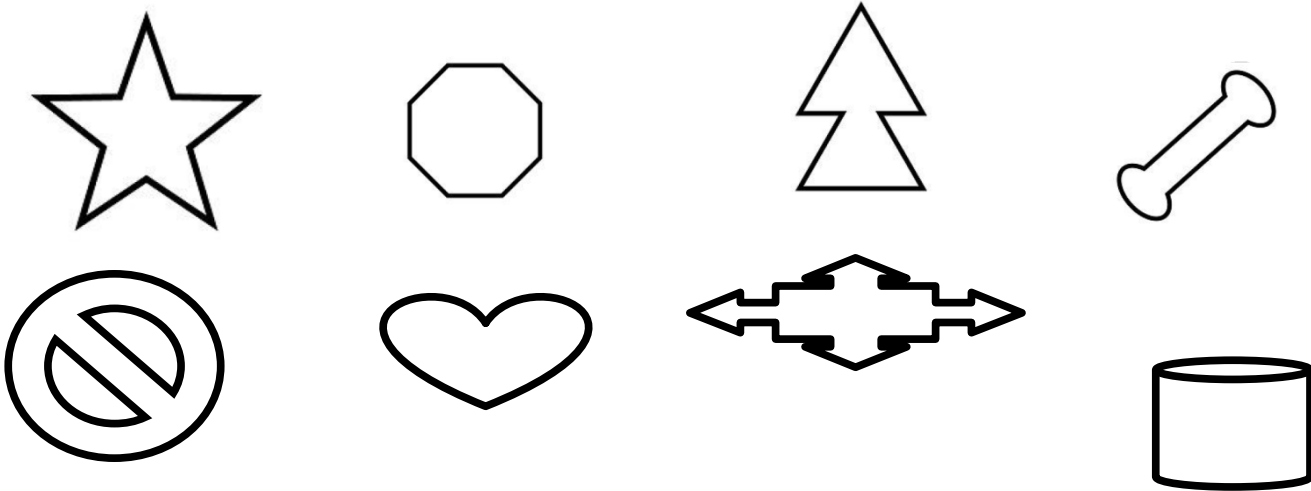
Q.1. Does the dotted line divide each picture into two similar mirror halves? Write 'Yes' or 'No'.




Q.2.Using a dotted line, divide the following letters into two similar halves?

E W U T

Q.3. Using a dotted line, divide the following pictures into two similar halves.



Q.4.. Draw the mirror half of each letter.



XII. Draw the mirror half of each letter in each of the following words.

BOOK

KID



2. Fun with Numbers

1. Namratha has **38** stamps. Rohini collected **42** stamps. Anand collected **58** stamps. Mohan collected **25** stamps.

Now fill in the blanks.

- ❖ _____ has the most stamps.
- ❖ Namratha will collect _____ more stamps to be equal to Rohini.
- ❖ _____ children have more than 30 stamps.
- ❖ If Rohini gets 8 more stamps, she will have _____ stamps.
- ❖ _____ needs 2 more stamps to have 60.
- ❖ _____ has 2 stamps less than 40.
- ❖ _____ has 5 stamps more than 20.

2. Count in 50's and fill in the blanks.

- 100, 150, 200, ____, ____
- 300, 350, 400, ____, ____
- 550, 600, 650, ____, ____
- 750, 800, 850, ____, ____
- 600, 650, 700, ____, ____

3. Who am I? Match with the number.

a) I come between 60 and 70 and there is a 5 in my name.

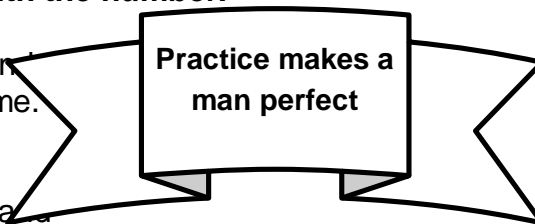
b) I have 8 in my name and I am very close to 80.

c) If you hit a 6 after me, you score a century.

d) I am equal to ten notes of 5.

e) I am a century+ a half century.

f) I am exactly in between 65 and 85.



7

9

6

150

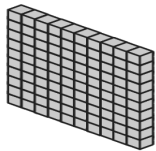
7

5

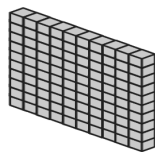
4. How many are these?








100



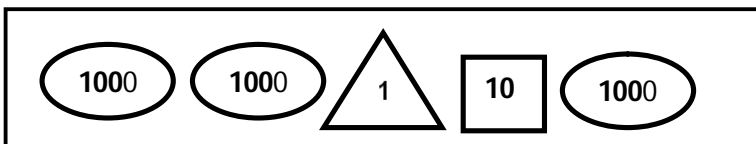
100

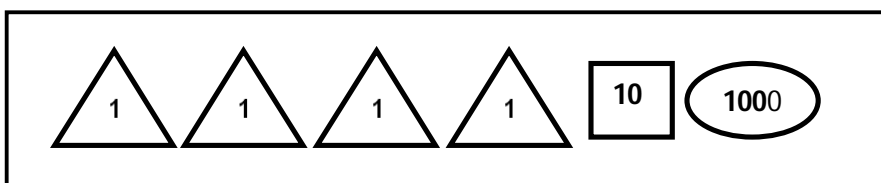


VI. Match the following.

- | | | |
|------------------|---|-------|
| $200 + 10 + 9 *$ | * | 906 |
| $4 + 100 + 20 *$ | * | 550 |
| $900 + 6$ | * | * 723 |
| $80 + 8$ | * | * 219 |
| $500 + 50$ | * | * 124 |
| $700 + 20 + 3 *$ | * | 88 |

XV. Add and write the number in the box.





L - 3 Give and Take

I. Fill in the blanks.

1) 54 more than 28 is _____.

2) 38 less than 72 is _____

3) _____ - 43 = 33

4) 68 + _____ = 91

4) The sum of 9 and 71 is _____.

5) Reducing 73 by 35 gives _____.

II. Do as directed.

1) Add the following using easy method.

a) $42 + 34 =$ + + +

$=$ + +

$=$ + =

b) $35 + 14 =$ + + +

$=$ + +

$=$ + =

2) Add the following.

a) $48 + 13 + 7 =$ _____

b) $230 + 44 =$ _____

c) $204 + 200 =$ _____

d) $150 + 135 + 5 =$ _____

3) Work out three different ways to write the following numbers.

a) 75

b) 80

_____ + _____

_____ + _____

_____ + _____

_____ + _____

_____ + _____

_____ + _____

4) Fill in the boxes with correct numbers.

a)

$$\begin{array}{r} \boxed{32} \\ \boxed{} \\ \boxed{} \\ \boxed{} \\ \boxed{} \end{array} + \begin{array}{r} \boxed{45} \\ \boxed{} \\ \boxed{} \\ \boxed{} \\ \boxed{} \end{array} = \begin{array}{r} \boxed{77} \\ \boxed{} \\ \boxed{} \\ \boxed{} \\ \boxed{} \end{array}$$

b)

$$\begin{array}{r} \boxed{47} \\ \boxed{} \\ \boxed{} \\ \boxed{} \\ \boxed{} \end{array} + \begin{array}{r} \boxed{80} \\ \boxed{} \\ \boxed{} \\ \boxed{} \\ \boxed{} \end{array} = \begin{array}{r} \boxed{33} \\ \boxed{} \\ \boxed{} \\ \boxed{} \\ \boxed{} \end{array}$$

5) Find the total.

$$\begin{array}{r} 268 \\ + 281 \\ \hline \end{array} \quad \begin{array}{r} 454 \\ + 168 \\ \hline \end{array} \quad \begin{array}{r} 607 \\ + 245 \\ \hline \end{array} \quad \begin{array}{r} 327 \\ + 408 \\ \hline \end{array}$$

L - 4 Long and Short

1) Fill in the blanks.

a) 1 centimetre = _____ millimetre (b) 1 metre = _____ centimetre

c) 124 cm = _____ m _____ cm d) 3 m 45 cm = _____ cm

2) Draw the following.

a) a pen of length 7 cm

b) a leaf of 4 cm long

c) a cup of length 9 cm

3) Write the names of any 4 things that have length more than 1 - metre.

_____, _____, _____, _____

4) Observe the different lengths of rope and answer the following questions.

A:- 78 cm

B:- 1 m

C:- 135 cm

D:- 45 cm

a) Which is the longest rope? A: _____

b) Which is the shortest rope? A: _____

c) What is the total length of rope C and rope D? _____

d) What is the difference of rope A and rope B? _____

5) Write centimetre or metre in the blanks.

a) The length of a flag pole 10 _____

b) The length of a blackboard 2 _____

c) The height of a coconut tree 5 _____

d) The length of a needle 3 _____

e) The width of your school bag 20 _____

f) The height of your class room 4 _____

6) Match the following.

a) Length of tooth brush

i) 5 m

b) Depth of a well

ii) 15 cm

c) Length of a sari

iii) 15 m

d) Distance between Kota and Rawatbhata

iv) 1 cm

e) Width of eraser

v) 50 km

5. Shapes and Designs


I. Colour the clown with Triangles blue, Squares red, Rectangles Green and circles Yellow and fill in the blanks.

Number of triangles: _____

Number of squares: _____

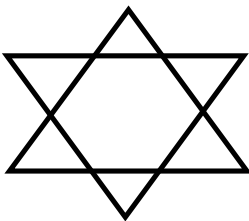
Number of rectangles: _____

Number of circles: _____



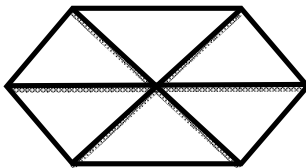
II. How many triangles are there in the following figures?

a)



Sol: _____

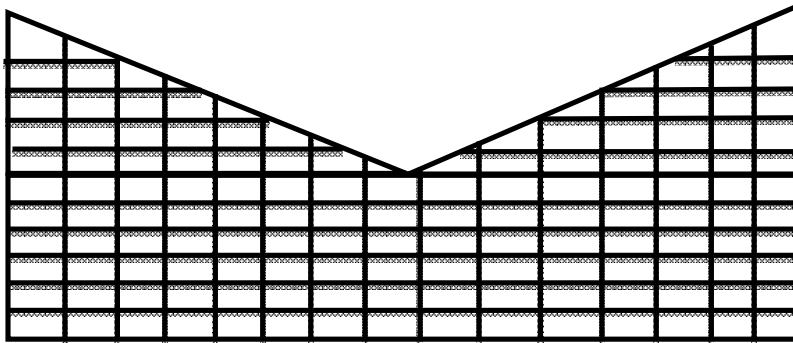
b)



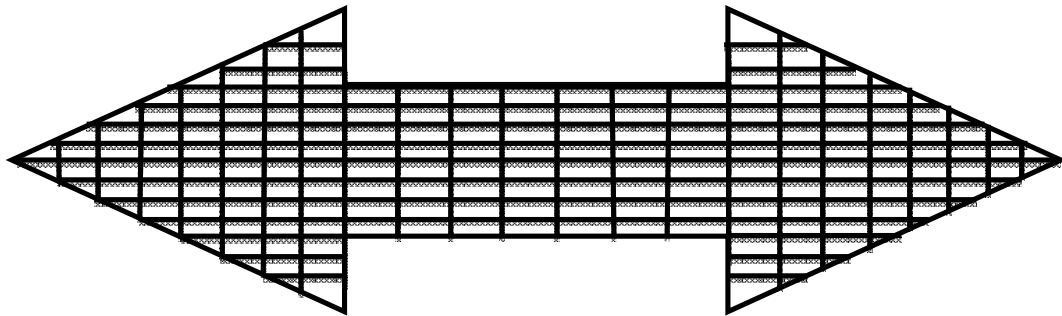
Sol: _____

III. Find the biggest rectangle in the figures given below.

a)



b)



L - 6 Fun with give and take

1) Subtract the following.

a) 387

b) 429

c) 490

d) 341

$- 135$

$- 325$

$- 288$

$- 173$

2) Find the missing numbers.

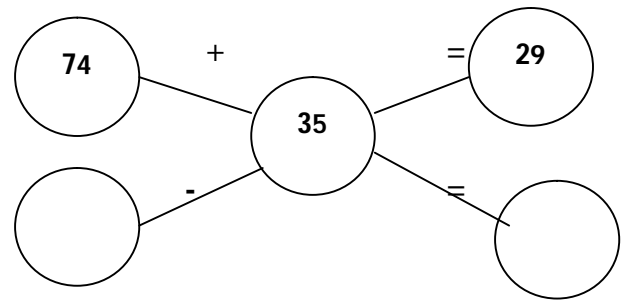
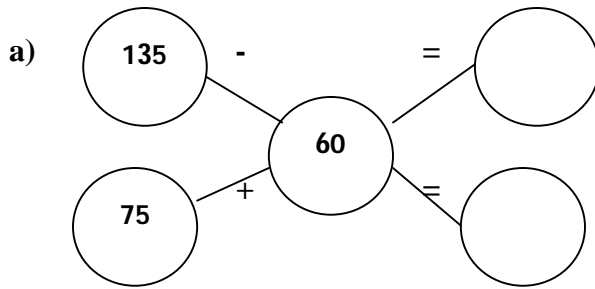
a) $20, 40, 60, \underline{\hspace{2cm}}, \underline{\hspace{2cm}}$.

b) $25, \underline{\hspace{2cm}}, 75, \underline{\hspace{2cm}}, \underline{\hspace{2cm}}, 150$.

c) $\underline{\hspace{2cm}}, 30, 45, 60, \underline{\hspace{2cm}}, \underline{\hspace{2cm}}$.

d) $700, 625, \underline{\hspace{2cm}}, 475, \underline{\hspace{2cm}}, \underline{\hspace{2cm}}$.

3) Work out the following combinations.



4) Subtract and check your answer using addition.

a) 537

Check

$- 321$

5) Fill in the missing numbers.

3	6	
1		4
	1	5

a)

	6	2
1		4
6	1	

b)

6) In a cricket match, England made 315 runs. India has made 156 runs. How many more runs does India need to win?

7) Ravi bought a school bag for Rs 355, a book for Rs 120 and a pencil box for Rs 75. How much money did he spend altogether?

8) Make a problem on the given following statement.

Garima read 138 pages out of 200 pages of her story book.