



ATOMIC ENERGY CENTRAL SCHOOL No.-4, RAWATBHATA

Periodic Test – 1 (2019-20)

Subject : English

Class – IV

Section : _____

Date: 07/01/2020

Name of the student : _____

Roll No: _____

Invigilator's sign: _____

Time - 1 $\frac{1}{2}$ Hours

Examiner's sign: _____

MM : 40 MO : _____

1. (A) Read the following passage carefully and answer the questions given below.

[5marks]

A monkey and a frog were friends. One morning a hunter came to the forest and caught the monkey in his net. The frog was very unhappy when he saw his friend struggling under the net. He quickly hopped back to the pond and brought back hundreds of his friends. As soon as the frogs saw the hunter coming, they jumped all over him and scared him to death. The poor hunter ran to save his life. The frogs then chewed open the net and the monkey was set free.

a). The hunter came to the forest and

(i) he caught the frog. ()

(ii) killed the monkey. ()

(iii) caught the monkey. ()

b). The frog went to the pond to bring

(i) the sharks and whales ()

(ii) his friends to help him ()

(iii) some water to drink ()

c) How did the frogs frighten the hunter?

d). Find words from the story which mean the opposite of:

(i) Close. _____ (ii) Evening _____

e). Make sentence of your own using the following word.

Unhappy- _____

(B) Read the following poem carefully and answer the questions given below. [5marks]

I had a little pony,

His name was Dapple Grey,

I lent him to a lady,

To ride a mile away.

She whipped him, she lashed him,

She drove him through the mire;

I would not lend my pony now,

For all the lady's hire.

a) What did the child decide to do?

b) What is the name of the pony?

c) How did the lady treat the pony?

d) Answer in one word-

Pony lives in _____.

e) Write synonyms of-

(i) Lady- _____

(ii) Whipped - _____

2. Write a paragraph on 'My Garden' using the points given below. [5marks]
[big garden, colourful flowers, flower beds , birds, big mango tree, butterflies, insects, caterpillars, garden chairs]



3. Write five sentences on Hiawatha. [5marks]

4. Complete the following sentences, choosing the right words from the brackets.[2marks]

- a) The bird sits on a _____. (bow/bough)
- b) I can _____ the bird's song. (hear/here)

5. Write the full form of :- [2marks]

- a) won't- _____
- b) didn't- _____

6. Pick out the silent letter from the words given. [1mark]

- a) often _____
- b) honesty _____

7. Fill in the blank with a suitable word. [1mark]

a) I saw a _____ peacock in the garden.

8. Fill in the blank with past tense form of the verb given in the bracket. [1mark]

a) The cow _____ (sit) in the middle of the road.

9. Punctuate and rewrite the given sentence. [1mark]

a) oranges mangoes bananas and papayas are fruits

10. Give one word for the following: [2marks]

a) to beat or hit very hard _____

b) home of the beavers _____

c) Our national language is _____

d) Poet of the poem ' A Watering Rhyme' is _____

11. State 'T' for true and 'F' for false. [2marks]

a) An illiterate Pundit visited the court. ()

b) Watering at the noonday makes the flowers die. ()

c) The boy made a house with the trunk of the tree. ()

d) Akbar accepted the challenge. ()

12. Answer the following questions. [6marks]

a) Why did the cow refuse to get up?

b) Who came to Akbar's court?

c) What is the best time to water the plants?



परमाणु ऊर्जा केंद्रीय विद्यालय क्र. - 4, रावतभाटा
द्वितीय सामयिक परीक्षा (2019-20)

विषय : हिन्दी

कक्षा - चौथी

अनुभाग : _____

दिनांक : 08/01/2020

विद्यार्थी का नाम : _____

अनुक्रमांक : _____

निरीक्षक के हस्ताक्षर : _____

समय : 90 मिनट

परीक्षक के हस्ताक्षर : _____

पूर्णांक : 40 प्राप्तांक : _____

1 - किन - किन चीज़ों को कुतरा जा सकता है ? 2

2 - कौन - कौन से शरारती जीव तुम्हारे घर में घुस जाते हैं ? 2

3 - अच्छी सेहत के लिए क्या-क्या खाओ - पिओगे ? 2

----- गर्म समोसे ----- गर्मागर्म साग

----- मीठा दूध ----- रंग-बिरंगी टाफी

4 - नीचे लिखी चीज़ों की विशेषता बतानेवाले शब्द लिखो - 2

----- हलवा ----- झंडा

5 - नीचे लिखे शब्दों में सही जगह पर (°) और (^) लगाओ ? 2

स्वतंत्र गाव

कहा पसद

6 - किन - किन चीज़ों को घोलते हैं ? 2

7 - नीचे लिखे मुहावरों का वाक्यों में इस्तेमाल करो - 2

दिन-रात एक करना

पसीना बहाना

8 - नीचे लिखे वाक्यों को अपने शब्दों में लिखो - 2

0 मगर बूँद भर तेल साँझ भी क्या तुम पाओगे ?

0 जहाँ न कोई बात वहाँ भी नई बात गढ़ते थे ।

9 -ये लोग क्या गढ़ते हैं ? 2

जैसे - पढ़क्कू - नई-नई बात

कुम्हार कवि

10 - समान अर्थवाले शब्द लिखो - 2

मंतिख छल

11 - कविता पूरी करो - 2

यहाँ सभी कुछ ठीक-ठाक है यह

बैल हमारा नहीं अभी तक

12 - धनी को बिन्नी की देखभाल करने की जिम्मेदारी थी । इनकी क्या - क्या जिम्मेदारियाँ थीं ? 2

माँ

बिंदा

13 - गांधी जी के बारे में तीन वाक्य लिखो ।

3

14 - नीचे लिखे प्रश्नों के उत्तर लिखो -

(क) धनी बिन्नी की देखभाल कैसे करता था ?

2

उत्तर

(ख) चुन्नू ने दाल को पहले खट्टा फिर मीठा क्यों बताया ?

2

उत्तर

(ग) पढ़कू का नाम पढ़कू क्यों पड़ा होगा ?

2

उत्तर

(घ) सुनीता को सब लोग गौर से क्यों देख रहे थे ?

2

उत्तर

15 - सुनीता के बारे में पढ़कर तुम्हारे मन में कई सवाल और बातें आ रही होंगी । वे बातें

सुनीता को चिट्ठी लिखकर बताओ ।

5

प्रिय सुनीता

तुम्हारा मित्र / तुम्हारी सहेली



ATOMIC ENERGY CENTRAL SCHOOL No.-4, RAWATBHATA

Periodic Test – II (2018-19)

Subject : Maths

Class – IV

Section : _____

Date: 06/01/2020

Name of the student : _____

Roll No: _____

Invigilator's sign: _____

Time - $1\frac{1}{2}$ Hours

Examiner's sign: _____

MM : 40 MO : _____

Q1. Fill in the blanks.

1 x 8 = 8

1. We can exchange a 1000 rupee note for _____ 100 rupee notes.
2. $40 \div 8 =$ _____
3. We can make the table of _____ with the tables of 7 and 5.
4. 16 legs of cats means there are _____ cats.
5. If the diameter of a circle is 6 cm, the radius is _____ cm.
6. There are _____ one-fourths in a whole.
7. $\frac{1}{4}$ kg + _____ kg = 1 kg
8. 72 stamps are divided among 3 children. Each child gets _____ stamp.

Q2. Draw the circle of the given radius and mark the centre as O.


2 marks

a) 3 cm


Q3. Colour the given part of the shapes.

4m

Ans



$\frac{1}{4}$



$\frac{3}{4}$

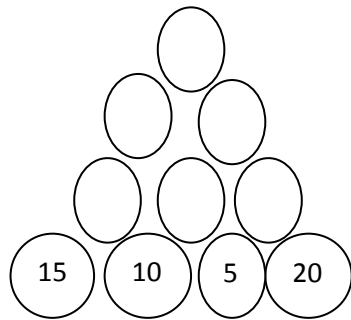
Q.4. (a) If CAT becomes DBU than what is the meaning of given secret message? 4m

JOEJB JT HSFBU - _____

(b) If JUMP becomes 10 21 13 16 than write the secret code for -

I LIKE MATHS - _____

Q.5. Complete the number tower. 2m



Q.6. Continue the pattern. 4 marks

- a) 111, 121, 131, 141, _____, _____,
- b) 6, 12, 18, 24, _____, _____,
- d) 21A, 23C, 25E, 27G, _____, _____,
- e) 40X, 42W, 44V, 46U, _____, _____,

Q7. Raju counted 60 wheels in a tricycle shop. How many tricycles were there in the shop? 2 marks

Ans.

Q8. Frame your question: 2 marks

- i) There are 10 packets of sugar. Arun paid 100 rupees for all the packets.

Question: _____

Q.9. There are 60 girls. $\frac{1}{4}$ of them are absent. How many girls are present? 2m

Ans.

Q.10. Divide.

4 marks

a. $36 \div 6$

b. $232 \div 4$

Q11. Sunil wants change for Rs 500.

2 marks

How many notes will she get if he wants in return-

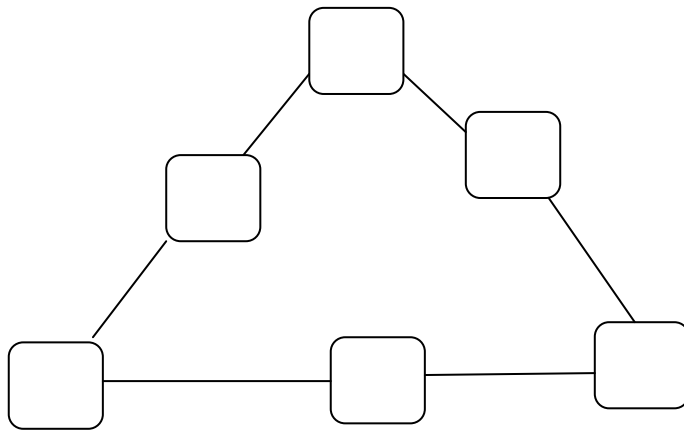
a. All 100 rupee notes?

b. All 5 rupee notes?

Q.12. Use numbers 1 to 6 to fill the boxes.

2m


Rule: Sum of each side should be 12. No number should be repeated



Q.13. Draw a design by using compass.

2m

Ans.



ATOMIC ENERGY CENTRAL SCHOOL No.-4, RAWATBHATA

Periodic Test – 2 (2019-20)

Subject : EVS

Class – IV

Section : _____

Date: 10/01/2020

Name of the student : _____

Roll No: _____

Invigilator's sign: _____

Time - 1 $\frac{1}{2}$ Hours

Examiner's sign: _____

MM : 40 MO : _____

Q. 1) Match the following :- (5 marks)

- | | |
|------------|---|
| 1. Khunti | (a) to sprinkle seeds in fields |
| 2. Bullock | (b) plants that grow in fields
Without being planted |
| 3. Kurige | (c) to cut the dried leaves from
the top of onions |
| 4. Weeds | (d) to dig the soil and loosen it |
| 5. Illige | (e) to pull the kurige |

Q.2) Fill in the blanks :- (5 marks)

- Illige is a sharp tool used to cut the _____ leaves.
- In _____, vegetables get dry quickly.
- Vaishali's father tries to sell _____ days vegetables first.
- Koel lays eggs in a _____ nest.
- Nandita come to Mumbai a month ago for her _____ treatment.
- Person who suffering from diarrhoea should sip water slowly and take _____ food.
- The _____ tree has hanging roots.
- Mid-day meal is a _____ of every child.
- A sweet prepared in langar is _____.
- Dhondu wanted to buy a _____.

Q. 3) Mark the following states in Map with different colours and names (6 marks)

1. Karnataka
2. Gujarat
3. Maharashtra
4. Andhra Pradesh
5. Assam
6. Punjab



Q.4) Give any two examples of each.

(5marks)

1. Name two part of the our body that keeps on growing.

_____/ _____

2. Roots which are eaten -

_____/ _____

3. Vegetables eaten raw -

_____/ _____

4. Leaves which are eaten -

_____/ _____

5. Flowers which are eaten -

_____/ _____

Q.5) State whether the statements are true or false.

(5 marks)

1. The seeds should be sown at the right depth and distance . ()

2. Chhotu attends school in the afternoon. ()

3. Pigeon have short, hard, horny beaks. ()

4. In Babloo's house, there was a tap in the kitchen. ()

5. We should wash our clothes near the water places. ()

6. There is a law against cutting trees. ()

7. Festival of Bihu is celebrated in Haryana. ()

8. After ardaas, Kadhah prasad was distributed. ()

9. There should be the different rules for girls and boys. ()

10. Roots hold the soil together. ()

Q. 6) Answer the following questions:-

(5 marks)

a) Why could not Abdul pull out the small grass from the bed ?

b) What was the name of children's Panchayat ?

c) Why did Nandita close the tap in Babloo's house ?

d) Write a short note on ' Weaver Bird '

e) Why does Mama have to change his house ?

Q. 7) Write three sentences on 'Desert Oak'.

(3 marks)

Q. 8) Draw the three bird feet pictures and their work.

(6 marks)