

ATOMIC ENERGY CENTRAL SCHOOL No.-4, RAWATBHATA

Periodic Test – 1 (2019-20)

Subject : English

Class – IV

Section : _____

Date: 22/07/2019

Name of the student : _____

Roll No: _____

Invigilator's sign: _____

Time - 1 $\frac{1}{2}$ Hours

Examiner's sign: _____

MM : 40 MO : _____

1. Read the following poem carefully.

The Swing

How do you like to go up in a swing,

Up in the air so blue?

Oh, I do think it is the pleasantest thing

Ever a child can do!

Up in the air and over the wall,

Till I can see so wide,

River and trees and cattle and all

Over the countryside

Till I look down on the garden green,

Down on the roof so brown ---

Up in the air I go flying again,

Up in the air and down!

A. Choose the correct answer.

(2)

I. According to the poet, what is the pleasantest thing a child can do?

(i) swing

(ii) play

(iii) walk

(iv) study

II. What is the opposite of wide?

(i) small

(ii) narrow

(iii) tiny

(iv) big

B. Pick out any two sets of rhyming words from the poem. (2)

(i) _____ (ii) _____

C. What are the things that the poet sees when he is on a swing? (2)

2. Answer the following questions.

a. Which creatures wake up in the morning before the child does? (2)

b. What does Neha wish to do? (2)

c. What is your favourite fruit? Write two lines on it. (2)

3. Find and encircle the correct spelling. (4)

a. (i) magician (ii) magecian (iii) magcian

b. (i) litle (ii) littlee (iii) little

c. (i) needle (ii) needel (iii) nedle

d. (i) preetty (ii) pritty (iii) pretty

4. Connect the pairs of sentences using 'and' or 'but'. (3)

a. (i) Raju plays cricket. (ii) He also plays hockey.

b. (i) Mohan ran fast. (ii) Sonu ran slowly.

c. (i) My mother wants me to study. (ii) I want to play with my friends.

5. Fill in the blanks using 'was' or 'were'. (2)

(i) Her frock _____ too long.

(ii) My toys _____ broken.

(iii) The children _____ happy.

(iv) Ram _____ a good football player.

6. Match the following body parts in to their functions as per their column. (2½)

Column A

Column B

Eyes : Smiling

Ears : Eating

Nose : Seeing

Lips : Hearing

Teeth : Breathing

7. Fill in the blanks according to the example given below. (3)

Small Smaller Smallest

Wide _____ _____

Tiny _____ _____

Late _____ _____

8. Identify and circle the Nouns in the following sentences.

$\frac{1}{2}$
(2)

(i) Ram is a great king.

(ii) Leena went to Delhi.

(iii) The sun is shiny and bright

9. State 'T' for true and 'F' for false.

(3)

Shetty was a magician.

(_____)

A goat ate all the golden leaves.

(_____)

The fir tree got its needle shaped leaves back.

(_____)

10. Give the opposite of the words by adding 'un' or 'im'.

(4)

(i) Happy × _____

(ii) Healthy × _____

(iii) Seen × _____

(iv) Pure × _____

11. Rewrite the passage using capital letters wherever necessary.


(2)

one friday evening seema and his little brother akash went to market for shopping.

there they met their old friends pinky, riya and rahul.

12. Write down the words related to birds.

(2)





परमाणु ऊर्जा केंद्रीय विद्यालय क्र. - 4, रावतभाटा
प्रथम सामयिक परीक्षा (2019-20)

विषय : हिन्दी

कक्षा - चौथी

अनुभाग : _____

दिनांक : 24/07/2019

विद्यार्थी का नाम : _____

अनुक्रमांक : _____

निरीक्षक के हस्ताक्षर : _____

समय : 90 मिनट

परीक्षक के हस्ताक्षर : _____

पूर्णांक : 40 प्राप्तांक : _____

प्र.1 इन शब्दों के अर्थ लिखो ।

4

बुद्धिमान - _____ मूर्ख - _____
विश्वास - _____ अभिमान - _____

प्र.2 कैसा कौन ? उदाहरण के अनुसार लिखो ।

4

	कैसा	कौन
सूरज - सी	चमकीली	थाली
चंदा - सा		
परियों - सा		

प्र.3 बादलों के लिए दिए गए अधूरे शब्द पूरे करो ।

2

म _____ ज़ि _____ शे _____ तू _____

प्र.4 पानी बरसने की चार आवाज़ें लिखो ।

2

प्र.5 वाक्य बनाओ -

2

चल-चल = -----

चलो = -----

प्र.6 नीचे लिखे मुहावरों का वाक्यों में प्रयोग करो ।

2

• नाक = भौंह सिकोड़ना- -----

• कलई खुलना = -----

प्र.7 कौन-कौन सी सब्जियाँ बेल और पौधे पर लगती हैं ?

4

बेल	पौधा
----- -----	----- -----

प्र.8 चिक सरकंडे से भी बनती है और तीलियों से भी । सरकंडे से और क्या-क्या बनता है ? 2

प्र.9 जिस इमारत में तीन मंज़िलें हों, उसे तिमंज़िली इमारत कहते हैं । बताओ, इन्हें क्या कहेंगे ?

- जिस मकान में दो मंज़िलें हों - 4
- जिस स्कूटर में दो पहिए हों -
- जिस झंडे में तीन रंग हों -
- जिस जगह पर चार राहें मिलती हों -

प्र.10 पापा के पापा को दादा कहते हैं । इन्हें तुम क्या कहते हो ? 4

माँ के पापा - माँ की बहन -

पापा की बहन - बहन के पति -

प्र.11 इन पंक्तियों के आधार पर बताओ कि तुम पापा के बारे में क्या सोचते हो ? 2

- पापा का जवाब हमेशा अलग - अलग होता था ।
ऐसा लगता है कि
- मैं छोटे बच्चों को मुफ्त में आइसक्रीम दिया करूँगा ।
ऐसा लगता है कि

प्र.12 नीचे लिखे प्रश्नों के उत्तर लिखो ।

(2X4=8)

(1) अगर तुम रेल से सफ़र करोगे तो तुम्हें प्लेटफ़ार्म और रेलगाड़ी में कौन - कौन लोग नज़र आएँगे ?

(2) दीपक बार - बार गेंद को अपनी क्यों बता रहा होगा ?

(3) दिनेश की माँ कौन - सी मशीन चला रही होंगी ?

(4) साल के किन - किन महीनों में बादल ज़्यादा छाते हैं?



ATOMIC ENERGY CENTRAL SCHOOL No.-4, RAWATBHATA

Periodic Test – 1 (2019-20)

Subject : Maths

Class – IV

Section : _____

Date: 20/07/2019

Name of the student : _____

Roll No: _____

Invigilator's sign: _____

Time - $1\frac{1}{2}$ Hours

Examiner's sign: _____

MM : 40 MO : _____

QI. Choose the correct answer from the brackets and fill in the blanks. ($1/2 \times 8 = 4$)

a. 8 cm is less than a meter by _____ cm.

a. 95 cm

b. 92 cm

c. 45 cm

b. $685\text{cm} =$ _____ m _____ cm

c. The number exactly between 425 and 475 is _____ -

a. 430

b. 450

c. 460

d. A brick has _____ faces.

a. 5

b. 4

c. 6

e. The face of a brick is _____ .

a. Triangle

b. Rectangle

c. Circle

f. _____ meter + 400 meter = 1 KM.

a. 200

b. 400

c. 600

g. If one mini bus can carry 25 students, then 3 buses can carry _____ students.

a. 75

b. 50

c. 60

h. $1\frac{1}{2}$ Km. = _____ m

a. 150

b. 1000

c. 1500

QII. Write 'True' or ' False'.

(1 x 5 = 5)

- a. When you trace a brick you get a circle. ()
- b. Length of paper pin is measured in cm. ()
- c. Half meter = 50 cm. ()
- d. Classroom is 50 m high. ()
- e. Five horses have 8 legs. ()

QIII. Fill in the blanks.

5 x 1 =5 marks

- a. If 36 chocolates are divided among 6 children, each child will get _____ chocolates.
- b. A number which can be divided by 2 , 5 and 6 and comes between 20 and 40 is _____.
- c. 5800 M = _____KM_____M.
- d. There are _____m in a kilomere.
- e. Half of Rs 2400 is Rs. _____.

Q IV. Do as directed.

2x11 =22

- a) Monil has a long jump of length 2m 85 cm. How many more should Mohan jump to make it equal to 3m?
- b) A snail climbs 4 cm in 1 minute but slips down by 3 cm. How much time will it take to climb 3cm?
- c) The cost of 1 litre petrol is Rs. 75. How many litres of petrol can we buy with Rs. 225?

d) Draw an arch with a veil (ghoonghat waali mehrab) on the wall.

e) Draw a brick showing its three faces.

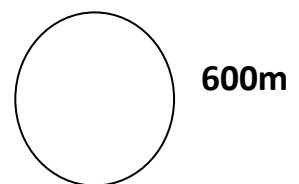
f) The height of a building is 24 m. The height of one room is 4 m. How many such rooms are there one on the top of the other?

g) Ravi gave 3 marbles to each four of his friends and 10 marbles are left with him. How many marbles did he have?

h) Draw a stick of 7 cm.

i) The length of the boundary of a circular park is 600 m.

- **How much distance Raju covers in 4 rounds?**





ATOMIC ENERGY CENTRAL SCHOOL No.-4, RAWATBHATA

Periodic Test – 1 (2019-20)

Subject : EVS

Class – IV

Section : _____

Date: 26/07/2019

Name of the student : _____

Roll No: _____

Invigilator's sign: _____

Time - 1 $\frac{1}{2}$ Hours

Examiner's sign: _____

MM : 40 MO : _____

Q.1 Fill in the blanks.

(5 marks)

- (a) The Khejri tree is found mainly in _____ areas.
- (b) _____ is an animal with ears like leaves.
- (c) The oldest female elephant is the _____ of the herd.
- (d) The people of Khejadli followed the teaching of _____.
- (e) Most of the bees in the hive are _____ bees.
- (f) Sun light does not pass through thick _____.
- (g) Animals whose ears we can see have _____ on their body.
- (h) Egret sitting on the buffalo eats _____ on the skin of the buffalo.
- (i) khejadli village is near _____ in _____.
- (j) Anita wants to become a _____ to help village people to get right price for their honey.

Q2. Answer in one word.

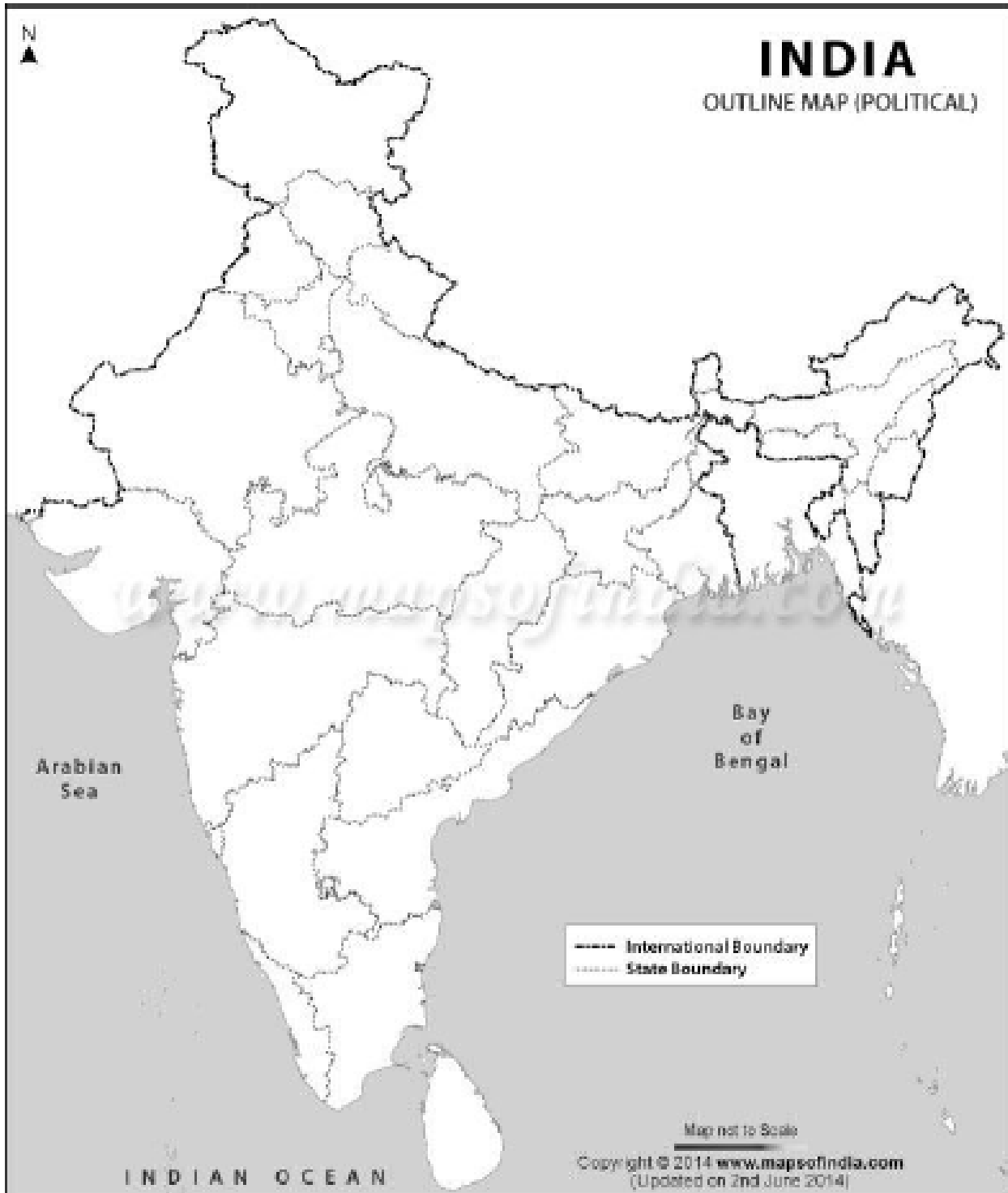
(5 marks)

- (a) A structure carrying road across, river, canal, railway crossing. _____
- (b) which is our national animal. _____
- (c) A group of elephant is called. _____
- (d) _____ is a small wooden boat used in Kerala.
- (e) Most active members in beehive. _____

Q3. Match the following and show there States in the map also.

(5 marks)

- | | |
|-------------------|-----------|
| (a) Bamboo bridge | kerala |
| (b) The trolley | Rajasthan |
| (c) camel-cart | Gujarat |
| (d) vallam | Ladakh |
| (e) Jugad | Assam |



Q4. State whether the Following statement are true or false. (5 marks)

- (1) Honey-bees lay eggs from January to March. ()
- (2) Amrita friends were trees. ()
- (3) A herd of elephants has no baby elephants. ()
- (4) Deer is an animal with ears that we can see. ()
- (5) It is very easy to walk on snow. ()
- (6) Rabbit is an animal with ears on the top of its head. ()
- (7) Elephants sleep for only two to four hours in a day. ()
- (8) Plants and animal can survive without us, but we cannot survive without them. ()
- (9) Most of the bees in the hive are male-bees. ()
- (10) In desert, it gets very cold in the day. ()

Q5. Name any two (2 marks)

- (a) Which animals lay eggs. _____, _____
- (b) Which give birth to young ones. _____, _____
- (c) Animals that we used for riding on. _____, _____
- (d) Things which we gets from Honey-bees. _____, _____

Q6. Give reason. (6 marks)

- (a) Amrita hugged the tree tightly after seeing the king's men.

- (b) People hunt tiger.

- (c) Students use Bamboo bridge.

Q. 7 Answer the following questions.

(10 marks)

(a) Write two advantages of bee keeping.

(b) Why had strangers come with axes in their hands ?

(c) What do you think about the animals who live in circus ?

(d) How is cement bridge different from a bamboo bridge ?

(e) What do people in your area put on the place where the bee has stung ?

Q8. Draw two insects that live in a group.

(2 marks)