

Atomic Energy Central School No. 4, Rawatbhata  
Multiple Choice Question Examination (January)

Name of the student : \_\_\_\_\_  
Class-V Sec. \_\_\_\_\_

Date : 28.01.2020  
Roll No. \_\_\_\_\_

- Instructions : 1. Fill & darken roll number field correctly on OMR Sheet. In case of any error, OMR Answer Sheet will be not be read by the OMR Scanner.  
2. Darken the most suitable option no. on OMR Answer Sheet.  
3. There is no negative marking.

1. Who is the poet of the poem 'Sing a song of people'?
- a) H.E.Wilkinson      b) Gervase Phinn      c) John Keats      **d) Lois Lbnski**
2. Write the synonym of underneath.
- a) below**      b) above      c) after      d) lift
3. Write the opposite of crowd.
- a) grumpy      b) slope      **c) alone**      d) meadow
4. Which mode of transport do the people use to move around in the city?
- a) ship      b) aeroplane      c) bullock cart      **d) taxi**
5. The highest point of their journey was \_\_\_\_\_ feet above sea level.
- a)6524      b) 8500      c) 5960      **d) 7524**
6. What was the name of the French passenger?
- a) Phileas Fogg      **b) Passepartout**      c) Jules Verne      d) Julis Ceaser
7. The first time the train stopped was because
- a) some robbers stopped the train.      **b) a herd of buffaloes was passing.**  
c) the tracks were broken.      d) Sioux Indians attacked the train.
8. Give a word for this sentence—person in charge of bus or a train
- a) driver      b) mechanic      c) sweeper      **d) conductor**
9. Which thing is associated with the sound 'whistling'?
- a) lion      b) waterfall      **c) wind**      d) aeroplane
10. A \_\_\_\_\_ of soldiers.
- a) troop**      b) team      c) choir      d) band
11. I can do the sum \_\_\_\_\_. (easy)
- a) easy      b) easiest      **c) easily**      d) most easy
12. Where is the Machu Picchu located?
- A) Egypt      b) Austria      c) New York      **d) Peru**
13. Write the meaning of hurried.
- a) slowly      **b) worked quickly**      c) falling      d) canyons
14. The bridge fell with a crash into the river-----
- a) after the train had passed through.**      b) the train was still on the bridge.  
c) before the train passed over the bridge.      d) none of the above.
15. Who attacked the train?
- a) Chinese      b) Russian      **c) Sioux Indians**      d) Japanese

16 - बिशन कितने वर्ष का था ?

- (क) 7 (ख) 8 (ग) 9 (घ) 10

17 - सुबह के समय सूरज कहाँ से झाँक रहा था ?

- (क) नदी से (ख) तालाब से (ग) पेड़ों से (घ) पहाड़ों के पीछे से

18 - सेबों के खेत में किस दवा का छिड़काव हो रहा था ?

- (क) मच्छर की (ख) मक्खी की (ग) कीटनाशक (घ) चींटी की

19 - बिशन को किसकी आवाज़ सुनाई दी ?

- (क) कुत्ते (ख) शेर (ग) गाली चलने की (घ) बिल्ली

20 - हल्की धूप में खेत कैसे दिखाई दे रहे थे ?

- (क) काले (ख) हरे (ग) सुनहरे (घ) लाल

21 - शिकारी शिकार करने कब जाते हैं ?

- (क) सुबह - सुबह (ख) शाम को (ग) दोपहर को (घ) रात को

22 - मैं तुझे देख लूँगा, किसने कहा ?

- (क) शिकारी ने (ख) बिशन ने (ग) कर्नल ने (घ) कोई नहीं

23 - मुर्गियाँ कहाँ रहती थीं ?

- (क) माँद में (ख) अस्तबल में (ग) पिंजरे में (घ) दड़बे में

24 - कर्नल दत्ता ने किसके पत्ते का रस पिलाने को कहा ?

- (क) नीम के (ख) गेंदे के (ग) तुलसी के (घ) आम के

25 - प्राथमिक चिकित्सा बक्से में क्या चीज़ नहीं होती है ?

- (क) रुई (ख) तेजपत्ता (ग) मरहम (घ) पट्टी

26 - तीतर को क्या खाना बहुत पसंद है

- (क) चावल (ख) राटी (ग) गेहूँ (घ) दलिया

27 - धरती की गुल्लक किससे नहीं भरती है ?

- (क) नदी (ख) तालाब (ग) गड्ढे (घ) पहाड़

28 - तुम्हारे घर में पानी कहाँ से आता है ?

- (क) गण्ठा (ख) यमुना (ग) चबल (घ) गाढ़ावरी

29 - कीमती शब्द का अर्थ है -

- (क) साधारण (ख) मूल्यवान (ग) अच्छा (घ) बुरा

30 - हवा शब्द का अर्थ है -

- (क) वायु (ख) दिन (ग) सूरज (घ) नदी

See the table and give the answer of questions 31 and 32.

Day	0	4	8	12	16	20
Length of the plant(in cm)	0	1.4	5.3	9.5	10.2	10.9

31. Between which days did the length of the plant change the most?

- (a) 0-4                      (b) 4-8                      **(c) 8-12**                      (d) 12-16

32. What could be the length of this plant on the 14<sup>th</sup> day?

- (a) 8.7 cm                      **(b) 9.9 cm**                      (c) 10.2 cm                      (d) 10.5 cm

See the table and give the answer of questions 33 and 34.

Time	Start	1 Year	2 Year	3 Year	4 Year
Number of rabbits	20	36	64	116	216

33. At the end of year 6, the number of rabbits was close to

- (a) 400                      (b) 600                      **(c) 800**                      (d) 500

34. After which year did the number of rabbits cross 1000?

- (a) 4 Year                      (b) 5 Year                      (c) 6 Year                      **(d) 7 Year**

35.  $15 \times \underline{\hspace{2cm}} = 120$

- (a) 8**                      (b) 7                      (c) 9                      (d) 6

36. The number of weeks in 196 days are \_\_\_\_\_.

- (a) 25                      (b) 26                      **(c) 28**                      (d) 27

37. How many dozens are there in 576?

- (a) 48**                      (b) 56                      (c) 45                      (d) 49

38.  $639 \times 25 \times 0 = \underline{\hspace{2cm}}$

- (a) 639                      (b) 25                      **(c) 0**                      (d) 15975

39. Raj drinks 6 glasses of water everyday. How many glasses will he drink in a year?

- (a) 1890                      (b) 1990                      **(c) 2190**                      (d) 2090

40. A baby blue whale drinks around 100 litres of milk in one day. How much milk would the baby blue whale drink in 9 months?

- (a) 36000 L                      **(b) 27000 L**                      (c) 12000 L                      (d) 900 L

41.  $15 \times 15 = \underline{\hspace{2cm}}$

- (a) 225**                      (b) 150                      (c) 175                      (d) 135

42. Ranu is getting Rs. 140 as salary for one day. If she works for  $1\frac{1}{2}$  month, how much will she earn?






- (a) 6300**                      (b) 2100                      (c) 4200                      (d) 1400

43. If Ram's heart bats 72 times in one minute, how many times does it beat in one hour?

- (a) 4420                      (b) 4200                      **(c) 4320**                      (d) 4220

44. What is the formula to find the perimeter of a rectangle?

- (a)  $2 \times (\text{Length} + \text{Width})$**                       (b) Side x Side  
 (c) 4 X Side                      (d) Length X Width

45. If  means 5 then what is the mean of    

- (a) 33                      (b) 32                      **(c) 18**                      (d) 20

46. In older times good quality seeds were stored in dried.  
 (a) brinjal                    **(b) gourd**                    (c) bittergourd                    (d) cucumber
47. To which state did Suryamani belong ?  
 (a) Chhattisgarh                    (b) Orisa                    **(c) Jharkhand**                    (d) Mizoram
48. The only dream of Jatrya was to send his children to \_\_\_\_\_.  
 (a) Forest                    **(b) School**                    (c) Village                    (d) City
49. In Mizoram how much of the people are linked to forests ?  
 (a) 40%                    **(b) 75%**                    (c) 50%                    (d) 25%
50. Which of the following is a natural fertilizer ?  
 (a) Neemleaves                    (b) Earthworm                    (c) Soil                    **(d) Cowdung**
51. A big wall built across the river is called.  
 (a) Bridge                    (b) Runway                    **(c) Dam**                    (d) Parking
52. The main occupation in village is \_\_\_\_\_.  
 (a) Teaching                    **(b) Farming**                    (c) Constructing                    (d) Fishing
53. Which plant gives a signal that the top layer of the soil has become dry ?  
 (a) Unicom                    (b) Pitcher                    **(c) Croton**                    (d) Lavender
54. To which community did Suryamani belong ?  
**(a) Kuduk**                    (b) Khasis                    (c) Bhills                    (d) Baiga
55. Jatrya was born in \_\_\_\_\_.  
 (a) Sinduri                    (b) Mizo                    **(c) Khedi**                    (d) Kuduk
56. The main crop of Jhoom Farming is \_\_\_\_\_.  
 (a) Wheat                    **(b) Rice**                    (c) Bajra                    (d) **Maize**
57. The smoke from burning tyres is horrible as well as.  
 (a) healthy                    **(b) unhealthy**                    (c) Useful                    (d) good
58. A state where undhiya is eaten with bajra rooti.  
 (a) Odisha                    (b) Maharashtra                    (c) Andhrapradesh                    **(d) Gujrat**
59. A State where has very thick forest.  
**(a) Nagaland**                    **(b) Jharkhand**                    **(c) Odisha**                    (d) Jammu and Kishmir
60. The centre opened by Suryamani with the help of adivasis is \_\_\_\_\_.  
 (a) Tarang                    (b) Torung                    (c) Torong                    **(d) Torang**