

Name of the student : _____ Class-V Sec. ____ Roll No. _____

Tick (✓) the correct answer-

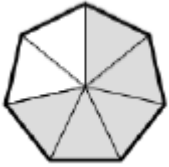
- 1) Munna and Bhaiya lived in _____
a) home b) hostel c) hotel d) village
- 2) Synonym of Idling is _____
a) lazy b) smart c) intelligent d) weak
- 3) Will you _____ me chess ?
a) taught b) teaches c) teach d) teaching
- 4) Rhyming word of log is _____
a) clock b) keep c) work d) frog
- 5) I have lived in this house _____ I was a baby.
a) for b) since c) between d) in
- 6) Who is the poet of The Lazy Frog ?
a) Gervase Phinn b) Galway c) Robert d) Anonymous
- 7) Word meaning of hard of hearing
a. a) blind b) bow c) deaf d) log
- 8) Rip was kind to children
a) true b) false c) can't say d) none of these
- 9) Give a word for - Near the lower part of a mountain
a) grizzled b) familiar c) astonished d) foothills
- 10) Who exclaimed --- "It is Rip Van Winkle!
a) his mother b) old woman c) villagers d) teacher

- 11) सदी" का समान अर्थ है -
(अ) सौ साल (ब) दो सौ साल (स) पचास साल (द) हजार साल
- 12) पिन कोड कितने अंको का होता है ?
(अ) दस (ब) छह (स) सात (द) एक
- 13) डाक सेवक का वर्दी का रंग होता है -
(अ) लाल (ब) पीला (स) नीला (द) हरा
- 14) 'साधारण' का विलोम शब्द कौनसा है ?
(अ) धारण (ब) असाधारण (स) साधारणों (द) सामान्य
- 15) चिट्ठी का सही बहुवचन कौनसा है ?
(अ) चिट्ठियाँ (ब) चीठियां (स) चिट्ठीयाँ (द) चीठ्ठीयाँ
- 16) नीचे दिए शब्दों में से शुद्ध शब्द कौनसा है ?
(अ) टेलिवीजन (ब) टैलिवीजन (स) टेलीविजन (द) टेलीविजन
- 17) कागज़ से पहले की छपाई किस पर होती थी ?
(अ) सिक्का (ब) फूल (स) कपड़ा (द) मिट्टी
- 18) "वे दिन भी क्या दिन थे " पाठ में रोहित को कौनसी चीज मिली थी ?
(अ) पुस्तक (ब) रेडियो (स) कार (द) पेन
- 19) रोहित को वह चीज कब मिली होगी ?
(अ) सन् 2036 (ब) सन् 2155 (स) सन् 2000 (द) सन् 2019
- 20) 'वे दिन भी क्या दिन थे?' पाठ में किस काल / समय का वर्णन है ?
(अ) भविष्यकाल (ब) वर्तमानकाल (स) भूतकाल (द) आदिकाल

21) What will be the equivalent fraction to $\frac{5}{7}$.

- (a) $\frac{5}{17}$ (b) $\frac{15}{14}$ (c) $\frac{25}{35}$ (d) $\frac{25}{28}$

22) What will be fraction for shaded part?



- (a) $\frac{2}{7}$ (b) $\frac{2}{5}$ (c) $\frac{7}{5}$ (d) $\frac{5}{7}$

23) We should sleep for $\frac{3}{8}$ part of the day. How much time should we sleep?

- (a) 6 hours (b) 9 hours (c) 3 hours (d) 8 hours

24) How many $\frac{1}{4}$ will make 2 ?

- (a) four (b) six (c) eight (d) ten

25) Three-fourth of 36 will be _____.

- (a) 27 (b) 4 (c) 9 (d) 36

26) The cost of 1 kg sugar is Rs 44. What will be cost of $2\frac{1}{2}$ half kg of sugar?

- (a) Rs 88 (b) Rs 110 (c) Rs 66 (d) Rs 44

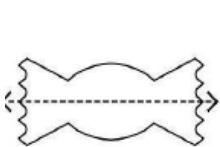
27) Which alphabets look the same after half a turn?

- (a) O, P, Z (b) M, N, O (c) B, I, O (d) N, O, I

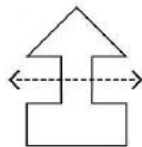
28) Which number will not look the same after half a turn?

- (a) 66 (b) 69 (c) 88 (d) 808

29) Which shape is divided into two mirror halves by the dotted line?



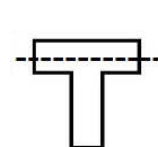
(a)



(b)

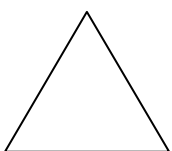


(c)



(d)

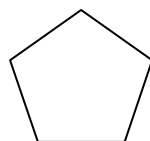
30) Which of the shape will look the same after $\frac{1}{4}$ turn?



(a)



(b)



(c)



(d)

- 31) Raised platforms made around the lakes were also known as
a) naulas b) johads c) chabutras d) bavdis
- 32) In which year did Gandhiji go on Dandi march ?
a) 1929 b) 1930 c) 1931 d) 1942
- 33) How much blood is needed to test Malaria ?
a) full syringe b) 2-3drops c) one bottle d) half syringe
- 34) Body should be kept at an angle of ___ while climbing a rock.
a) 30° b) 45° c) 60° d) 90°
- 35) The Cannon placed in Golconda fort is made of
a) copper b) bronze c) iron d) steel
- 36) In high school Sunita wanted to become a
a) diver b) astronaut c) teacher d) helicopter pilot
- 37) In Ghadsisar ___ lakes were interconnected.
a) 5 b) 3 c) 9 d) 10
- 38) Which of the following can be separated from water by straining with cloth?
a) oil b) salt c) lemon juice d) chalk powder
- 39) The height of Mount Everest is
a) 8848m b) 8846m c) 8844m d) 8842m
- 40) Mountaineers should take vitamin _____ tablet.
a) A b) B c) C d) D