

ATOMIC ENERGY CENTRAL SCHOOL No.-4, RAWATBHATA

Confidence Exam (2018-19)

Subject : English

Class – V Section : _____ Date: 19/02/2019

Name of the student : _____ Roll No: _____

Invigilator's sign: _____ Time – 3 Hours

Examiner's sign: _____ MM : 80 MO : _____

I. READING:

1. Read the passage and answer the questions that follow:

10

It was the day after Thanksgiving, and Bobby Bear was so excited. His grandparents were visiting from Florida. They took Bobby Bear Christmas shopping. They rode the subway from Bobby's house into the city. When they got off the subway, Bobby could see people everywhere. The people were carrying bags, presents, and Christmas decorations.

Christmas is Bobby Bear's favourite time of year, because he loves the holiday decorations. Bobby Bear's grandparents took him to three stores. He bought his mother a new robe, his father a new shirt, and his baby sister a new teddy bear.

Next, Bobby Bear's grandparents took him to eat pizza for lunch. Bobby ate pepperoni pizza. For dessert, he had ice cream. After lunch, Bobby Bear and his grandparents went ice-skating. The ice-skating rink was outside. Bobby had never been ice-skating before, and he really liked it.

Bobby slept during the subway ride home. When he got home, there were boxes of Christmas decorations ready to unpack. His family decorated their house for Christmas that night. When they finished the decorating, they built a fire in the fireplace and sang Christmas carols. It was a wonderful day.

1. This story takes place _____.

- a. on a summer night in February
- b. on the day after Thanksgiving
- c. on Christmas Day
- d. on Thanksgiving night

2. Who went shopping with Bobby Bear?

- a. his mother
- b. his grandparents
- c. his baby sister
- d. his father

3. What did Bobby eat for lunch?
- a. ice cream
 - b. hot dogs
 - c. pizza
 - d. both a and c
4. How did Bobby and his grandparents travel to the city?
- a. the subway
 - b. a taxi
 - c. a bus
 - d. an airplane
5. Why did Bobby Bear's grandparents take him to the city?
- a. to go shopping
 - b. to go ice-skating
 - c. to eat lunch
 - d. all of these
6. Bobby had never been _____.
- a. ice-skating before
 - b. to eat pizza before
 - c. shopping before
 - d. to Florida before
7. What did Bobby Bear see when he got off the subway?
- a. the stores
 - b. people
 - c. an ice-skating rink
 - d. the pizza place
8. Who did Bobby Bear buy a robe for?
- a. his teacher
 - b. his sister
 - c. his father
 - d. his mother
9. Why do you think Bobby slept on the way home?
- a. He was very hungry.
 - b. He was tired.
 - c. He was sick.
 - d. He was happy.
10. What did Bobby Bear's family do that night?
- a. They went to the movies.
 - b. They ate popcorn.
 - c. They decorated their house for Christmas.
 - d. They ate their Thanksgiving meal.

2. Read the following passage and answer the questions that follow: 5

A king is called a Ningthou and a queen is called a Leima in Manipuri. Long, long ago in the land of Kangleipak in Manipur, there lived a Ningthou and a Leima. They were loved dearly by the people. Even they never stopped thinking about their meeyam, their people. The birds and animals too loved the Ningthou and Leima.

Their beloved king and queen had three sons: Sanajaoba, Sanayaima and Sanatomba. Twelve years later, they had a daughter named Sanatombi. She was a lovely child, soft and beautiful inside. The years went by, and the children grew up well. Then came the time to decide the ThungiNingthou, the future king. They wanted to have a contest to select the future king

1. Write the words used to describe Sanatombi.

_____ and _____

2. The language spoken in Manipur is _____

3. People of Kangleipak _____ their king and queen. (loved/hated)

4. Which word in the passage mean the opposite of:

past x _____ hard x _____

5. Which word in the passage mean:

competition - _____

3. Read the following passage and answer the questions that follow: 5

Once there was a small boy called Hari. He pinched all the children so all the children hated him. One day all the children go to picnic to the seaside for a whole day. But nobody wanted to sit next to Hari because he always pinched. So he was angry. He sat down a sandy corner near a rocky pool. He saw a monster crab walking sideways out of the pool. The lobster took his hand in his mouth and great pincer him so he was running away quickly.

1. What was the name of the small boy?

2. Where did all the children go one day?

3. Why did all the children hate Hari?

4. Write the opposite of hate?

5. Write the plural form of child.

II. PROSE AND POETRY:

Answer the following:

10

1. Why did the barber want a lot of food?

2. Why did the men rush back to the ship?

3. How can you say that Hari had no friends?

4. Why do you think all these people are in a hurry?

5. Match the following:

Leima

future king

Thungi Ningthou

queen

Meeyam

king's daughter

Sanatombi

people

Read the poem:

High up in an icy lair

Lived a little polar bear

Snow white, snow bright was her mane,

MaluBhalu was her name.

6. Name the poem and the poet.

A. Poem: _____ B. Poet: _____

7. Where did the polar bear live?

8. Write a detailed character sketch of Malu Bhalu.

Rewrite as directed:

1. The crow _____ in search of water(was/were). It _____ a pot of water (see/saw). **(Choose the right word and fill in the blanks)**
2. Ravi went to the party with Ravi's brother as Ravi's friend has called both Ravi and Ravi's brother. **(Rewrite using suitable pronouns instead of underlined words)**

-
3. The _____ sang beautifully. (group/choir)
The hunter shot at the _____ of birds. (flock/herd)
 4. The small train went with maximum speed and appeared_at the station.
 5. Megha is quiet, while Nirav is talkative. But they both are good friends.
(underline the describing words in the above sentence Q. 4 & 5)

6. Raju _____ Ravi ran fast, _____ they missed the bus.
(Fill in the blanks with suitable joining words)
7. the, the, earth, round, goes. **(Arrange the words to make a meaningful sentence)**

-
8. The boy was as _____ as a tortoise.
Her frock is as white as _____

(Fill in the blanks with suitable similes)

9. (i) Rohit is _____ than Mohan.(short)
(ii) America is the _____ country in the world. (rich)

(Fill in the blanks with the correct form of the word given)

10. _____ the dog wags its tail when its pleased but a cat waves its tail when its angry

(Punctuate the sentence and write again)

4. Make words ending with -less and -ly :

1. light _____

2. home _____

3. pain _____

4. angry _____

VI . SPELLING:

10

1. Rewrite the following sentences with the opposites of the underlined words:

1. The arrival of the train is at 6 pm.

2. He always comes late.

2. correct jumbled word and write correct word

a) ape par - _____ b) Ipmortnat - _____

c) psosb I le - _____ d) knId - _____

3. Fill the missing letters:

a) Hari was a **b**____ **ll** ____.

b) The **lo**____ ____ **ter**pinched Hari very badly.


c) The farmer's wife covered Gulliver with a clean **ha**____ **dker**____ **hief**.

d)The barber was **t** ____ **lka** ____ **ive**.

परमाणु ऊर्जा केंद्रीय विद्यालय क्र. - 4, रावतभाटा

विश्वास परीक्षा (2018-19)

विषय : हिन्दी



कक्षा – पाँचवीं

अनुभाग : _____

दिनांक : 21/02/2019

विद्यार्थी का नाम : _____

अनुक्रमांक : _____

निरीक्षक के हस्ताक्षर : _____

समय : 3 घंटे

परीक्षक के हस्ताक्षर : _____

पूर्णांक : 80 प्राप्तांक : _____

प्रश्न 1 - गद्यांश पढ़कर नीचे लिखे प्रश्नों के उत्तर लिखो -

आरिफ, सलीम चलो , फौरन सो जाओ । अम्मी की आवाज़ ऐन उस वक्त आती थी , जब वे दोस्तों के साथ बैठकर कच्ची गा रहे होते थे । या फिर सुबह बड़े मजे में आइसक्रीम खाने के सपने देख रहे होते कि आपा झिझोड़कर जगा देती , जल्दी उठो स्कूल का वक्त हो गया । दोनों की मुसीबत में जान थी । हर वक्त पाबंदी , गाने का मूड आता तो भाई जान डाँटते चुप होता है या नहीं । हर वक्त मेढक की तरह टर्राए जाता है ।

प्रश्न - सही विकल्प पर गोला बनाओ -

0 आरिफ-सलीम सुबह बड़े मजे से क्या खाने के सपने देख रहे होते थे ? 1

बरफी गुलाबजामुन बेर आइसक्रीम

0 आरिफ को क्या करने का मूड आता तो भाई जान डाँटते थे ? 1

नाचने खेलने गाने सोने

0 दोनों घंटों बैठकर पाबंदियों से बच निकलने के लिए क्या सोचा करतेथे? 1

भागना तरकीब छिपना दिखाना

0 नीचे लिखे शब्द का अर्थ लिखो - 1

पाबंदी -----

0 विलोम शब्द लिखो 1

सुबह -----

प्रश्न 2 - गद्यांश पढ़कर नीचे लिखे प्रश्नों के उत्तर लिखो -

सुबह का समय था । पहाड़ों के पीछे से सूरज झाँक रहा था । दस वर्ष का बिशन घर से बाहर निकल आया । वह रोज़ इसी समय इसी रास्ते से फार्म हाउस पर जाता है । कर्नल दत्ता की पत्नी पढ़ाई में उसकी मदद करती हैं । फार्म से लगे खेतों के बाग में कीटनाशक दवा का छिड़काव हो रहा था और बहुत तड़के काम शुरू हो जाता था । बिशन पगडंडी से अभी सड़क तक आ ही रहा था कि उसे गोली चलने की आवाज सुनाई दी । उसने इधर-उधर देखा , कोई भी दिखाई नहीं दिया । वह कुछ ही दूर चला था कि उसे फिर गोली चलने की आवाज सुनाई दी । इस बार एक नहीं , दो-तीन गोलियाँ एक साथ ही चलीं थीं । गोलियों की आवाज से पूरी घाटी गूँज गई । पंछी घबरा गए । आसमान में गोल-गोल चक्कर काटने लगे । बिशन सहमकर पेड़ों की आड़ में छिपकर खड़ा हो गया ।

प्रश्न - बिशन कितने वर्ष का था ?

1

उत्तर

प्रश्न - बिशन रोज सुबह कहाँ जाता था ?

1

उत्तर

प्रश्न - सही विकल्प पर गोला बनाओ -

0 सुबह के समय पहाड़ों के पीछे से कौन झाँक रहा था ?

1

बिशन सूरज चाँद तारे

0 गोलियों की आवाज सुनकर कौन घबरा गया ?

1

कुत्ते बिल्ली बाघ पंछी

0 सूरज का अर्थ है -

1

चाँद सूर्य पृथ्वी आकाश

प्रश्न 3 - अपठित गद्यांश पढ़कर नीचे लिखे प्रश्नों के उत्तर लिखो -

भारत एक कृषिप्रधान अद्भुत देश है। यहाँ कृषि वर्षा पर निर्भर करती है।

यहाँ छः ऋतुएँ होती हैं जो अपनी छटा दिखाकर लोप हो जाती है। वर्षा ऋतु का आगमन उस समय होता है जब सारा जन जीवन गर्मी से त्रस्त हो जाता है। वर्षा का आगमन किसान के लिए विशेषरूप से आनंददायक होता है। वर्षा के आते ही उमंग भर जाता है। काले-काले बादल आसमान में छा जाते हैं, बिजलियाँ चमकने लगती हैं, बड़ी-बड़ी बूँदों के साथ वर्षा की झड़ी लग जाती है। सभी प्रसन्न हो जाते हैं। मोर जंगल में खुशी से नाचने लगते हैं। पेड़-पौधे हरे-भरे हो जाते हैं, किसान प्रसन्नता से नाच उठते हैं। वर्षा ऋतु में नदी - नालों का वेग तीव्र हो जाता है। नदी, तालाब भर जाते हैं। वर्षा से हमें लाभ भी है क्योंकि हमारा देश कृषिप्रधान देश है। वर्षा जहाँ हमारे लिए लाभदायक है। कभी-कभी कष्टप्रद भी हो जाती है।

(क) एक वाक्य में उत्तर लिखो-

5

0 इस गद्यांश का उपयुक्त शीर्षक लिखो ?

उत्तर

0 भारतवर्ष कैसा देश है ?

उत्तर

0 भारतवर्ष में कुल कितनी ऋतुएँ होती हैं ?

उत्तर

0 वर्षा ऋतु का आगमन किस समय होता है ?

उत्तर

0 वर्षा ऋतु हमारे लिए कैसी है ?

उत्तर

(ख) सही शब्द चुनकर खाली जगह भरो -

5

0 वर्षा का आगमन किसान के लिए विशेषरूप से होता है ।

आनंददायक सुखदायक दुःखदायक हर्षदायक

0 वर्षा के आते ही भर जाता है ।

खुशी दर्द उमंग दुःखी

0 वर्षा ऋतु में नदी-नालों का वेग हो जाता है ।

मंद तीव्र गतिमान प्रचंड

0 अद्भुत शब्द का अर्थ है ।

सरल समान सुंदर अनोखा

0 लाभदायक का विलोम शब्द है ।

हानिकारक सुखकारक आनंददायक फलदायक

प्रश्न 4 - नीचे लिखे प्रश्नों के उत्तर लिखो -

(क) बाघ दिनभर क्या-क्या करता होगा ?

2

उत्तर

(ख) यदि अँधेरनगरी की प्रजा राजा से परेशान थे तो उन्होंने उसे खुद क्यों नहीं हटाया ? 2

उत्तर

(ग) अँधेरनगरी की सड़कें और रास्ते कैसे थे ?

1

उत्तर

प्रश्न 5 - नीचे लिखे प्रश्नों के उत्तर लिखो -

(क) अब्बा ने क्या सोचकर आरिफ की बात मान ली ?

2

उत्तर

(ख) बिशन घायल तीतर को क्यों बचाना चाहता था ?

2

उत्तर

(ग) कोको की माँ किस रंग का फूलदान लाई थी

1

काला सफेद पीला गुलाबी

प्रश्न 6 - (क) अँधेर नगरी के बारे में 5 वाक्य लिखो -

5

(ख) स्वामी के दादी के बारे में 5 वाक्य लिखो -

5

प्रश्न 7 - (क) कोष्ठक में दिए गए संबंध के बारे में बताने वाले शब्द में से उचित शब्द

चुनकर खाली जगह में लिखो -(में ने से को)

2

0 बारिश ----- भीगना मत अन्नो ।

0 कोको की माँ ने दुकान ----- एक फूलदान खरीदा था ।

(ख) नीचे दिए हुए वाक्य किस काल के हैं -

3

(वर्तमानकाल भूतकाल भविष्यकाल)

0 गीता किताब पढ़ रही है । -----

0 मोहन कल कोटा जाएगा । -----

0 सीती कल स्कूल नहीं आई थी । -----

(ग) नीचे लिखे वाक्य में सर्वनाम शब्द चुनकर लिखो

2

0 नीना चलो , मैं बाद में आऊँगी । -----

0 मोहन तुम्हारा घर कहाँ है । -----

(घ) नीचे दिए गए वाक्यों में से क्रिया शब्द चुनकर लिखो -

2

0 मीना पिट्टू खेल रही है । -----

0 चुन्नू किताब पढ़ रहा है । -----

(च) नीचे लिखे देशों की मुद्राएँ क्या हैं -

2

0 जापान ----- इटली -----

(छ) सही शब्द चुनकर वाक्य पूरे करो -

2

चकाचक फटाफट

0 हंसा अपना सारा काम ----- कर लेती है ।

0 बर्तन धुलकर ----- हो गए ।

(ज) नीचे लिखे शब्दों को शुद्ध करो - 2

नाराकि ----- हल्लामो -----

प्रश्न 8 - (क) वाक्य बनाओ - 2

0 खूँखार डाक् -----

0 रूखा स्वर -----

(ख) नीचे लिखे रेखांकित शब्दों के लिंग पहचानकर लिखो - 2

0 पुलिस की वर्दी -----

0 ताँबे के सिक्के -----

(ग) नीचे लिखे वाक्य के शब्द क्रम बदलकर लिखो - 2

0 किस तरह के बच्चे होते हैं अच्छे ।

0 आसमान से ज़मीन पर गिरीं सब्ज़ियाँ ।

(घ) नीचे लिखे वाक्यों को पूरा करो - 2

0 वह इतना धीरे-धीरे चल रहा था मानो -----

0 रात में चमकते तारे ऐसे दिखाई दे रहे थे मानो -----

प्रश्न 9 (क) नीचे लिखे वाक्यों को अपने शब्दों में लिखो -

0 सुबह की हल्की धूप में खेत सुनहरे दिखाई दे रहे थे । 2

0 वह इतना तेज चल रहा था मानो पंख लग गए हों । 2

(ख) नीचे लिखे वाक्यों में सर्वनाम का ठीक रूप लिखो - 2

0 सेंटीला ----- घर नागालैंड के किस शहर में है । (तुम)

0 सुधा ने ----- बुआ से पूछा , पापा आपसे कितने बड़े हैं । (आप)

(ग) नीचे लिखे शब्द के दो अर्थ (पर्यायवाची) लिखो - 2

सूरज -----

(घ) नीचे लिखे शब्दों में से शुद्ध शब्द पर गोला लगाओ - 2

0 क्कितज्ञता कृतज्ञता कृतग्यता क्रीतज्ञता


0 वीवश बिवश विवश बिवश

(च) शब्द पूरे करो - 2

चक्र ----- तीं मुख्या ----- य

10 - सुलेख लिखो - 5

आज का विद्यार्थी कल का नागरिक है । देश की उन्नति उसी पर निर्भर है । विद्यार्थी देश की उन्नति को शिखर तक पहुँचा सकता है । भविष्य में श्रेष्ठ नागरिक बनने के लिए विद्यार्थियों में कुछ गुणों का होना आवश्यक है । उसे व्यवसायी होना चाहिए तथा ज्ञानार्जन के लिए कठोर परिश्रम करना चाहिए ।



ATOMIC ENERGY CENTRAL SCHOOL No.-4, RAWATBHATA

Confidence Exam (2018-19)

Subject : Maths

Class – V Section : _____ Date: 22/02/2019

Name of the student : _____ Roll No: _____

Invigilator's sign: _____ Time – 3 Hours

Examiner's sign: _____ MM : 80 MO : _____

SECTION- A (KNOWLEDGE) – 20M

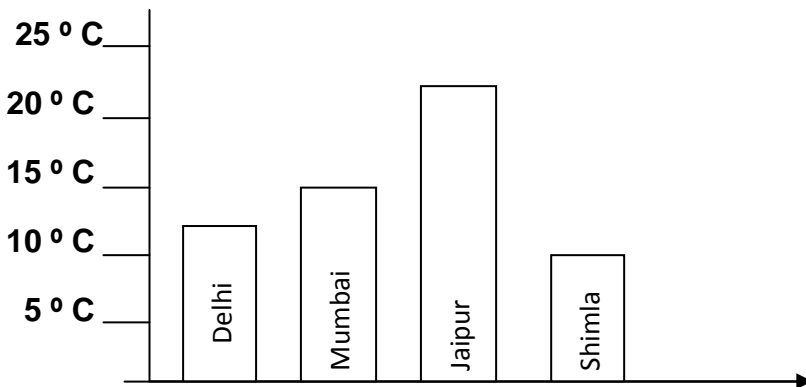
Q I. Choose the correct answer and fill in the blanks. (1 x 5=5M)

1. Uttarakhand and Himachal Pradesh lies to the _____ of the country.
a. East b. West c. North d. South ()

2. The distance between Kota and Delhi is 4 cm on map. The actual distance between them is _____.(scale 1cm = 150 km)
a. 450 km b. 500 km c. 600 km d. 300 km ()


3. Rakhi needs 35 cm more to reach a height of 2m. Her present height is _____.
a. 195 cm b. 215 cm c. 165 cm d. 185cm ()

4. Carefully look at the figure. The hottest city is _____



a. Jaipur b. Shimla c. Delhi d. Bangalore ()

5. The length of the lady finger is _____ cm.



a. 12.5 b. 10.5 c. 14.5 d. 10 ()

QII. Match the following.

(1/2 x 6 = 3M)

- | | |
|-------------------------|---------------|
| a) 5 paise | 1. Rupee 0.75 |
| b) rupee $\frac{1}{2}$ | 2. Rupee 0.10 |
| c) Rupee $\frac{3}{4}$ | 3. Rupee 0.05 |
| d) Rupee $\frac{1}{10}$ | 4. Rupee 0.50 |
| e) Rupee 5 | 5. 1300 paise |
| f) Rupees 13 | 6. 500 paise |

a- _____ b- _____ c- _____ d- _____ e- _____ f- _____


Q III. Fill in the blanks.

(1 x 4 = 4M)

a. A 40 m wire is required to fence a square garden, then each side of the garden _____ m long.

b. 11m 5 cm is equal to _____ metres.

c. The difference between the temperatures 39.9°C and 24.8°C is _____.

d. The area of  is 1 square cm. Then the area of the design is _____.



QIV. Do as directed.

(2 x 4 = 8M)

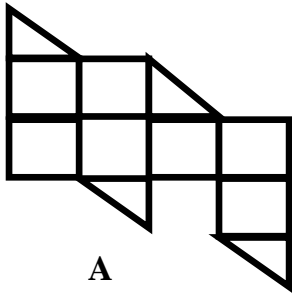
1. How many square stamps of side 5 cm can fit on to a page of length 70 cm and breadth 40 cm?

Ans.

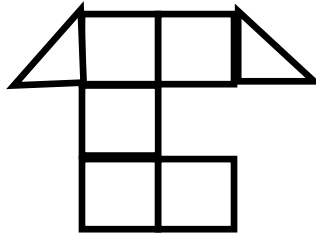
2. The cost of an ice cream is Rs.32.50. What is the cost of 9 ice-cream?

Ans.

3. Find the area of the following figures in square cm.



A

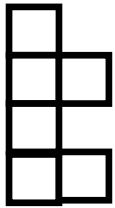


B

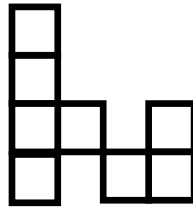
Area of A: _____

Area of B: _____

4. Find the perimeter of the following figures .Each square is of side 1cm.



A



B

Perimeter of A: _____

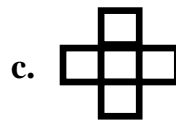
Perimeter of B: _____

SECTION- B (UNDERSTANDING) – 20M

Q I. Choose the correct answer and fill in the blanks.

(1 x 5=5M)

1. The net of the given solid shape is _____ 



2. 1centimetre = 1/100 of a _____.

a. km

b. metre

c.cm

d. mm ()

3. 11 kilograms = _____gms.

a. 1100

b. 11100

c.110

d.11000 ()

4. By how much is 24°C greater than 16.4°C?

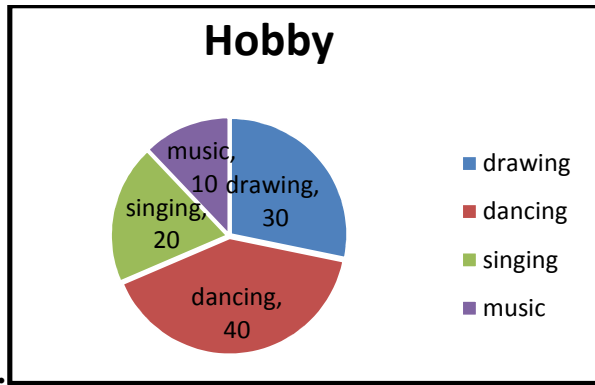
a. 5.4°C

b.6.6°C

c.7.6°C

d. 4°C ()

5. Look at the chapatti chart below.



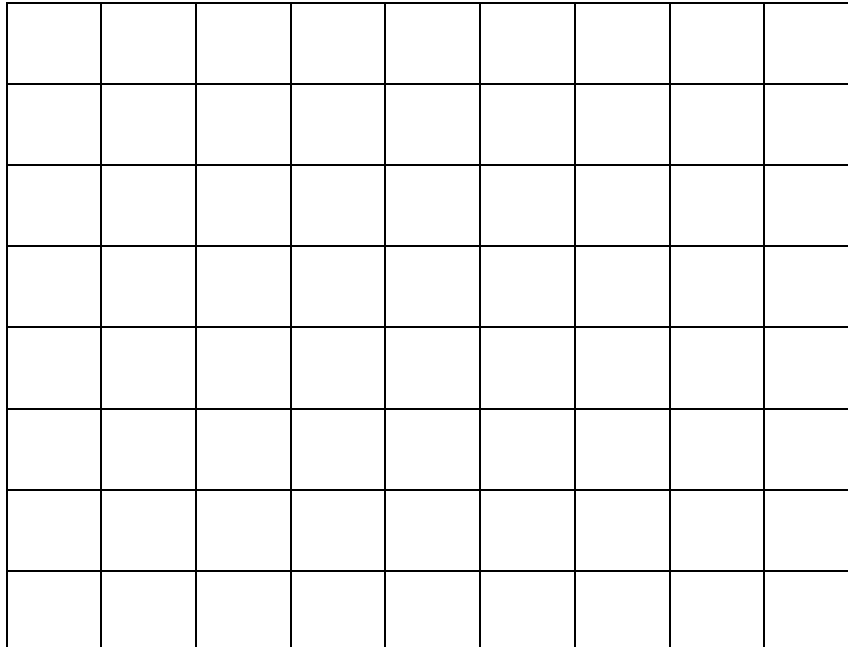
_____ is the hobby of most of the children.

- a. Drawing b. music c. singing d. dancing ()

Q.II. Do as directed.

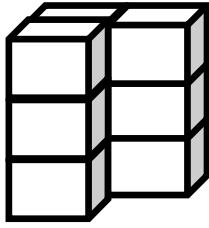
(2x6=12m)

1. Draw two shapes that can be folded to make a cube.



2. How many dice of edge 2 cm will fit into a box of dimensions 15 cm x 8cm x 20 cm ?

3. How many cubes are needed to make this model?



Ans: _____ cubes


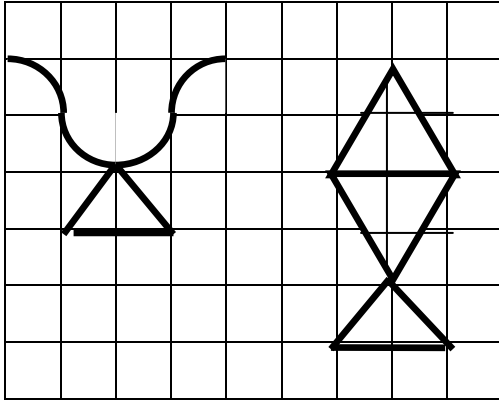
4. Represent the shaded portion as decimal.



$$\frac{\boxed{}}{10} = \underline{\hspace{2cm}}$$

5. Divide 3675 by 11.

6. Represent the same design in $\frac{1}{2}$ cm grid.



QIII. State ' True' or ' False'. ($\frac{1}{2} \times 6 = 3$)

- a. There is no state to the west of Gujarat. ()
- b. A cube has 5 corners. ()
- c. There are 100 cm in a millimeter. ()
- d. 3 weeks 4 days is equal to 25 days. ()
- e. The space occupied by a solid is its volume. ()
- f. The area of square of side 1 cm is 4 square centimeters. ()

SECTION- C (ABILITY TO COMPUTE) – 20M


I. Do as directed.

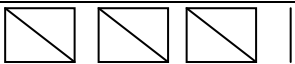


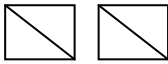
(2x7=14m)

1.If 1 cm on the map shows 60 km on the ground, use the scale to find out:

(i) _____ cm = 150 km

(ii) 20 cm = _____ km.

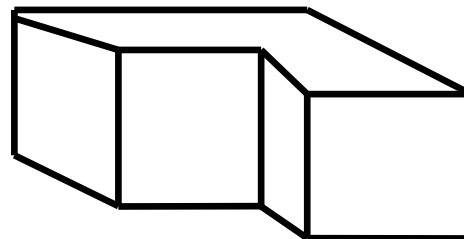
2.The favourite sport of some children are given in the table. Study the table and answer the following questions.  Means 5 children.

Colours	Tally Marks
Hockey	
Cricket	
Football	
Table Tennis	

- a. _____ sport is liked by most of the children.
- b. _____ children like Hockey.
- c. _____ sport is liked by least of the children.
- d. How many children are there in all? _____

Q.3. Look at the floor map of a house. Make doors and windows on the deep drawing of this house.

window



Q.4. A five rupee coin weighs 9 grams. What is the weight of a sack with 2000 coins?

Q.5. Change the following into appropriate units.

a) 97 cm = _____ m

b) 0.9 cm = _____ mm

Q.6.The value of one Euro is Rs. 72.50 in Indian currency.Raj’s uncle send 150 euros every month. Raj uses Rs. 9500 every month and saves the rest. How much money does Raj save every month in rupees?

Ans.

Q.7. Write the decimal number.

a) $30+7+ \frac{60}{100} =$ _____

b) $700+0+9+ \frac{3}{10} + \frac{5}{100} =$ _____

QII. Fill in the gaps.

(1x6=6m)

a. The length of a rectangle is 6cm and its perimeter is 30 cm. Its breadth is _____cm.

b. A pencil costs Rs.7.Cost of $1\frac{1}{2}$ dozen pencils is _____.

c. 9kgs. 700 gms is _____ kgs.

d. If 3km on ground is equal to 1cm on the map. Then _____ km on ground is 5cm on map.

e. A dog drinks 6 litres of water everyday. It drinks _____ litres of water in 30 days.

f. The side of a square is 2 cm . If its side is doubled, then its area is _____sq. cm.

SECTION- D (Problem Solving) – 20M

QVI. Solve the problems.

(2 x 10 = 20)

1) 1 Euro = Rs 82.50

a) How many rupees can be exchanged with 25 Euros?

b) Raj has Rs 495. How many Euros can she get from this amount?

2) Which will have a larger area?

A square with side 13 cm or a rectangle of length 12cm and breadth 11cm?

3) Find the breadth of a swimming pool whose area is 720 Sq. m and length is 40 m?

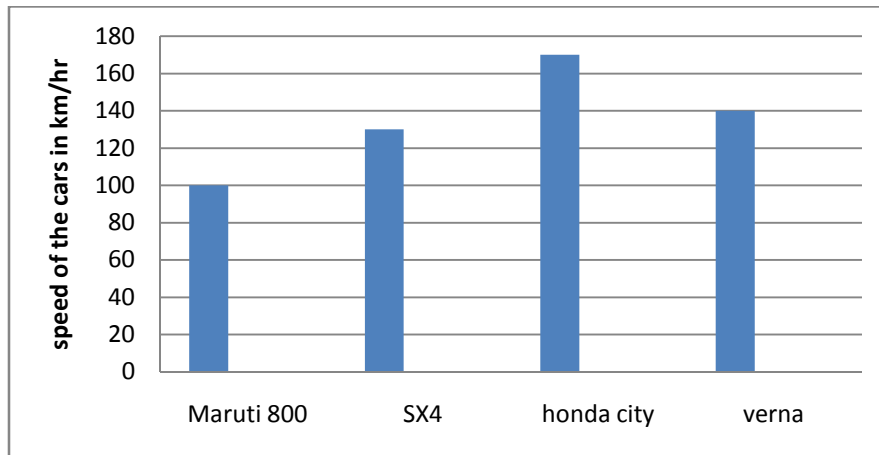
4) A company sells 1 litre of packed water for Rs.16. A shopkeeper buys 560 litres of packed water . How much does he pay?

5) Nine 5 rupee coins push 45 ml of water, then-

a) How many five rupee coins will push 20 ml of water?

b) How much water will be pushed up by 16 five rupee coins?

6) The following bar graph shows the top speed different cars attain. Fill in the blanks with the help of the bar graph:



- a) The fastest car is _____.
- b) The Maruti 800 is _____ km/hr slower than Verna.
- c) The top speed of Honda city is _____ km/hr.
- d) _____ is the slowest car.

7. Draw a square of 4 sq. cm. Write A on it. Draw another square with double the side. Write B on it. Answer these.

- a) Perimeter of square B is _____ cm.
- b) Perimeter of square B is _____ times the perimeter of square A.

8. 3825 books are to be arranged in shelves. If 75 books are arranged in 1 shelf. How many shelves are needed?

9. Draw a chhapati chart for the given data.

Type of book	No. of children
Story book	40
Science fiction	20
Comics	5
adventure	15

Q10. Look at the price tag of the items given below.



a. How many balls can Raj buy for Rs. 1092?

b. A pen costs Rs 7.50. How much will 3 and a half dozen cost?



ATOMIC ENERGY CENTRAL SCHOOL No.-4, RAWATBHATA

Confidence Exam (2018-19)

Subject : EVS

Class – V Section : _____ Date: 20/02/2019

Name of the student : _____ Roll No: _____

Invigilator's sign: _____ Time – 3 Hours

Examiner's sign: _____ MM : 80 MO : _____

OBSERVATION AND REPORTING (30 MARKS)

Q1. Choose the correct answer and fill in the blanks. (5×1=5)

(big machines, solar, fuel, goats, rebo, roof, sheep, donga, ash, drought, arches, untied, girls)

- 1) We need..... to pump the petrol out and clean it.
- 2) and are Changpas only treasure.
- 3) The door and Windows of old houses have beautiful.....
- 4) People today expect that can play different games.
- 5) The cut weeds are burn and their..... is mixed with the soil to make ready for sowing.

Q2. Observe the picture and answer the following. (2×5=10)

(a) What is this and what do you understand by this?



(b) What is the woman doing and what harm to her and her family from this?



(c) what will be do when earthquake come .



(d) Explain the picture.



(e) Who is this and what had done by this man?



Q3. Match the following.

(4×1=4)

1) Boats can be seen in Dal lake and Jhelum river.




2) beautiful carving on wood that can be seen on the ceiling of houseboat.



3) Some old houses have a special type of window which comes out the wall.



4) The doors and windows of the old houses in Srinagar have beautiful.



Q4. Circle the odd one out.

(1×6=6)

1. (a) Mizoram (b) Rajasthan © Uttarakhand (d) Jharkhand
2. (a) petrol (b) diesel © kerosene (d) wood
3. (a) Sunlight (b) petrol © coal (d) uranium
4. (a) torang (b) forest © jungle (d) desert
5. (a) United (b) cooperation © team spirit (d) fight
6. (a) Tsunami (b) famine (c) flood (d) deforestation

Q5. Look at the picture carefully and answer the following questions. (1×5=5)



(a) Do we really need to save forest? How?

(b) Explain the danger of deforestation.

© What are the benefits of trees ?

(d) What are women trying to save ?

(e) Tell me about forest act 2007.

IDENTIFYING GROUP AND CLASSIFICATION (25 marks)

Q6 1) Answer in one word. (8×1=8)

- a) The tent made of yak hair in which changpas live is called a.....
- b) Whenever air flows the paper snake will move in a clockwise direction.
- c) between the members is the strength of team.
- d) Undhiya is eaten with rotis.
- e) Shortage of water and food can result in.....
- f) The smoke and smell coming from burning is horrible and unhealthy.
- g) In earlier times farmer use leaves to protect the seeds from insects.
- h) Baskets are woven from and leaf plates are made from leaves.

2) Give examples. (12×1/2=6)

a) Wind instruments

b) Two uses of petroleum

c) Why goats and sheep are Changpas treasure ?

1. _____

2. _____

d) Name two States which have thick forest.

e) Name two States which have less forests.

f) Name two places that are famous for boathouse.

3) Give reason.

(3×2=6)

a) Why is an earthworm called a farmer's friend ?

b) Why are forests are called collective banks ?

c) Who are identical twins and unidentical twins ?

1V) "Afsana has jump over the wall. The gender wall that her mother had put up for her." What was this wall and what do you understand by 'gender bias' ?

(1×5=5)

Ans.

DISCOVERY OF FACTS (25 marks)

Q7. Answer the following question in one sentence (3×1=3)

1) Why do poor people in towns collect rubber pieces and old tyres ?

2) What is refinery ?

3) How are seeds protected from insect in olden days ?

Q8. Tick the correct answer

(4×1=4)

(a) A boy is sitting under a table holding tightly during an earthquake.

Why do you think so ?

1. The table will walk like a parachute while the boy is one down.
2. He will be comfortable under the table during the earthquake.
3. It is easier to find someone trapped under a table or any other large subject.
4. The table will save him for heavy things like stones roofs or fans falling on him.

(b) Suppose you are given hot Khichdi to eat. How will cool down without blowing air from your mouth ?

- 1) By mixing cold water into it.
- 2) By spreading it over the plate.
- 3) By putting ice cube into it.
- 4) By spreading it over our palm.

(c) It is difficult to breathe at high places. why?

1. The body stops working properly at such heights.
2. Air is thin and at low pressure.
3. Due to cold , air freezes.
4. Nose has to work harder to breathe in air.

(d) The doors and windows of old houses in Srinagar have beautiful.....

1. Donga
2. Khatamband
3. Dab
4. Arches

Q9. Answer the following questions in two or three sentences. (5×2=10)

1. What types of difficulties are faced by people during floods ?

2. Why do we see drops of water on your bathroom mirror, when you take in hot shower in winter ?

3. Who was Dr Bhim Rao Baba Saheb Ambedkar ? what did he become famous for ?

4. Why were girls not encouraged to play in earlier times ? what they are expected to do ?

5. How did Jatrya suffer in sinduri village ?

Q10. Look at the data and give some answers. (4×1=4)

Oil	rate of 1 litre in 2008	In 2011
Petrol	50	66
Diesel	35	41

- a) In three years the rate of petrol went up by.....rupees.
- b) In three year the rate of diesel increased by..... rupees.
- c) was the difference in rates of petrol and diesel in year 2008.
- d) is the difference in the rates of petrol and diesel in year 2011.

Q11 Mark and name the following states on the map of India.

(8×1/2=4)

- a) Manipur
- b) Mizoram
- c) Rajasthan
- d) Uttarakhand
- e) Jharkhand
- f) Gujarat
- g) Jammu and Kashmir
- h) Meghalaya

