

Atomic Energy Education Society
Annual Examination-2018-19

Class : V
Subject : EVS

Time : 3 Hrs
Marks : 80

To be filled by the student

Student's Name: _____

Name of the School: _____

Class /Sec. : _____ Roll No.: _____

Date of Examination: _____

To be filled by the teacher

Invigilator's Sign: _____

Examiner's Sign : _____

Marks Obtained: _____

Checker's Sign: _____

General Instructions:

This paper consists of:

Section A: Observation and Reporting ----- 30 marks

Section B: Identification and Classification ----- 25 marks

Section C: Discovery of Facts ----- 25 marks

All the questions are compulsory.

SECTION - A
(Observation and Reporting – 30 Marks)

1. Identify the following pictures and write their names . (5x1=5)



a. _____



b. _____



c. _____



d. _____



e. _____

2. Tick (✓) the correct answer.

(5x1=5)

a) How many players play in each team of a basketball game?

- i) 5
- ii) 6
- iii) 7
- iv) 11

b) When did the earthquake occur in Gujarat?

- i) January 26, 2000
- ii) January 26, 2001
- iii) June 26, 2000
- iv) June 26, 2001

c) The distance between Mumbai and Delhi is about

- i) 140 m
- ii) 140 km
- iii) 1400 km
- iv) 1400m

d) Manali is located in

- i) Arunachal Pradesh
- ii) Sikkim
- iii) Uttarakhand
- iv) Himachal Pradesh

e) Which community does Suryamani belong to?

- i) Santhal
- ii) Munda
- iii) Bonda
- iv) Kuduk

3. Answer the following

(5x1=5)

a) Who was Dr. Zakir Hussain?

b) What is Gender bias?

c) Who is Mukadam?

d) What is compost?

e) What do you mean by an adopted child?

4. Give reasons

(2x2=4)

a) We should use petroleum products carefully and judiciously.

b) Bhaskarbhai had croton plants in his field.

5. Answer the following

(2x3=6)

a) What is Torang? Why was it opened?

b) What should one do in case there is an earthquake?

c) What did Gregor Mendel find out?

6. What is Undhiya? How is it prepared?

(5)

SECTION – B

Identification and classification -25 Marks

7. Write True (if correct) or False (if wrong) against the statements. (1x5=5)

- a) Rebo is a conical tent. ()
- b) Thresher is used to weave clothes from thread. ()
- c) Noor Khan is the coach of NBA ()
- d) There are no forests in Mizoram. ()
- e) A brother and a sister can be twins. ()

8. Choose the correct answer and fill in the blanks.

(1x5=5)

- a) _____ are called Soil's best friends. (Earthworms/ Snakes)
- b) 'Mirchi' was Suryamani's _____. (peacock/ parrot)
- c) _____ said, 'Forests are our collective bank'.
(Suryamani/Budhiamai)
- d) The place where petroleum is refined is called _____.
(Mill/ Refinery)
- e) _____ movement of paper snake shows that hot air flows upwards. (clockwise / anti-clockwise)

9. Give any two examples of each

(3x2=6)

- a) People who worked against untouchability.

- b) Fuels for cooking

- c) Tribes of Jammu and Kashmir

10. Circle the odd one.

(4 × 1 = 4)

- a) Petrol diesel electricity kerosene
- b) Ploughing weaving sowing harvesting
- c) Flood Torang earthquake drought
- d) Rebo houseboat Changthang Donga

11. Write any five differences between the following -

(1X5=5)

Damjibhai's way of farming	Hasmukh's way of farming

SECTION – C

Discovery of Facts -25 Marks

12. Give one word for

(1x5=5)

a) A person who writes news for magazine or newspaper _____

b) A sweet roti made of jaggery and gram _____

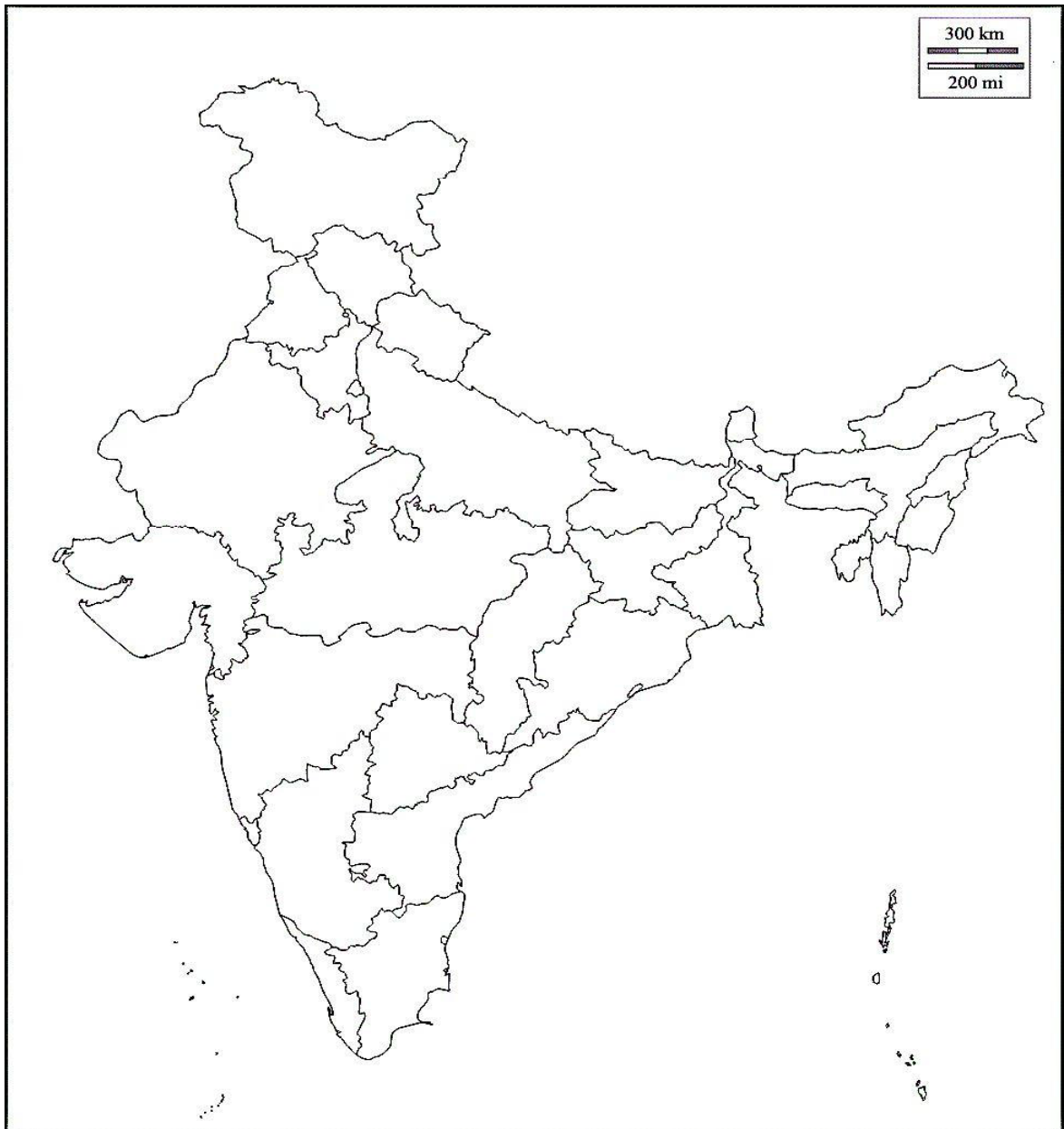
c) One who designs buildings _____

d) Head of the Village _____

e) A book that contains rules to govern the country _____

13. Write the states related to the following and locate the state on the outline map of India. (1X5=5)

- a) Gandhiji's Sabarmati Ashram _____
- b) Jungle Bachao Andolan by Suryamani _____
- c) Pashmina wool _____
- d) Cheraw dance _____
- e) Chhatrapati Shivaji Terminus (earlier called Victoria Terminus) _____



14. Answer the following.

(5x2=10)

a) Write the full form of

CNG - _____

NBA - _____

b) Name two situations when we blow air from our mouth.

i. _____.

ii. _____.

c) Name two agencies who help us during a natural disaster.

d) What is Right to Forest Act 2007?

e)What is difference between Saroja and Suvasini ?

परमाणु ऊर्जा शिक्षण संस्था
अणुशक्तिनगर, मुंबई - 400094

वार्षिक परीक्षा-(टर्म-2)-2018-2019 (पृष्ठों की संख्या-12)

कक्षा: पाँचवी (5)

समय - 3 घंटे

विषय: हिंदी

पूर्णांक - 80

नाम-

विद्यालय का नाम -

कक्षा / वर्ग - अनुक्रमांक -

दिनांक -

निरीक्षक के हस्ताक्षर -

परीक्षक के हस्ताक्षर -

प्राप्तांक -

जाँचकर्ता के हस्ताक्षर -

.....

(पठन क्षमता पर आधारित प्रश्न)

प्रश्न 1 निम्नलिखित गद्यांश को पढ़कर नीचे लिखे प्रश्नों के उत्तर लिखिए ।

बिशन ने सोचा, “कितना दुख पहुँचाने वाला काम करते हैं ये शिकारी !” वह समझ गया कि शिकारी ही तीतरों पर गोलियाँ चला रहे हैं। इसलिए वह पेड़ों के बीच में से निकल कर खेतों के किनारे-किनारे चलने लगा। वह चलते-चलते सोच रहा था कि इन शिकारियों को सबक सिखाया जाना चाहिए। लेकिन उन्हें कैसे सबक सिखाया जाए, यह उसकी समझ में नहीं आ रहा था । तभी उसके पाँव के पास सरसराहट-सी हुई । उसने देखा एक घायल तीतर गेहूँ की बालियों के बीच फँसा छटपटा रहा है ।

क) “कितना दुख पहुँचाने वाला काम करते हैं ये शिकारी !” किसने सोचा ? (1)

.....

ख) कौन तीतरों पर गोलियाँ चला रहे थे ? (1)

.....

ग) खाली जगह भरो । (1)

उसने देखा एक घायल गेहूँ की बालियों के बीच फँसा छटपटा रहा है।

घ) समान अर्थवाला शब्द लिखिए । (1)

पाँव =

ङ) विलोम शब्द लिखिए । (1)

दुख-

प्रश्न 2 निम्नलिखित गद्यांश को पढ़कर नीचे लिखे प्रश्नों के उत्तर लिखिए ।

हमारी यह धरती भी इसी तरह की खूब बड़ी गुल्लक है । मिट्टी की बनी इस विशाल गुल्लक में प्रकृति वर्षा के मौसम में खूब पानी बरसाती है। तब रुपयों से भी कई गुना कीमती इस वर्षा को हमें इस बड़ी गुल्लक में जमा कर लेना चाहिए। हमारे गाँव में, शहर में जो छोटे - बड़े तालाब, झील आदि हैं वह धरती की गुल्लक में पानी भरने का काम करते हैं । इनमें जमा पानी ज़मीन के नीचे छिपे जल के भंडार में धीरे-धीरे रिसकर, छनकर जा मिलता है। इससे हमारा भूजल भंडार समृद्ध होता जाता है ।

क) खूब बड़ी गुल्लक किसे कहा गया है ? (1)

.....

ख) कौन से मौसम में प्रकृति खूब पानी बरसाती है ? (1)

.....

ग) वर्षा को हमें इस बड़ी गुल्लक में क्या कर लेना चाहिए ? (1)

.....

घ) समान अर्थ वाला शब्द लिखिए । (1)

वर्षा =

ङ) वचन बदलिए । (1)

झील -

प्रश्न 3 निम्नलिखित अपठित गद्यांश को पढ़कर नीचे लिखे प्रश्नों के उत्तर लिखिए ।

सच्चा मित्र शिक्षक की तरह होता है । जिस प्रकार शिक्षक अपने छात्रों को अच्छाई तथा सन्मार्ग की ओर ले जाता है, उसी प्रकार सच्चा मित्र भी अपने मित्र को बुराई की ओर जाने से रोकता है । जिसे जीवन में सच्चा मित्र मिल गया, उसे समझो बहुत बड़ा खजाना मिल गया । कभी-कभी मानव जीवन में ऐसे अवसर भी आते हैं, जब मनुष्य निराश हो जाता है तब जीवन के प्रति उसका मोह समाप्त हो जाता है । ऐसी अवस्था में सच्चा मित्र आशा की किरण बनकर, जीवन के प्रति आकर्षण पैदा करता है। मनुष्य के मन पर सबसे ज़्यादा प्रभाव मित्र का पड़ता है।

क) गद्यांश का उचित शीर्षक चुनकर लिखिए । (1)

(मानव जीवन / शिक्षक / सच्चा मित्र)

.....

ख) सच्चा मित्र किसकी तरह होता है ? (1)

.....

ग) शिक्षक अपने छात्रों को किस ओर ले जाता है ? (1)

.....

घ) जिसे सच्चा मित्र मिल गया मानो उसे क्या मिल गया ? (1)

.....

ड) जब मनुष्य निराश हो जाता है तब क्या होता है ? (1)

.....

च) कौन आशा की किरण बनकर जीवन के प्रति आकर्षण पैदा करता है ? (1)

.....

छ) नीचे लिखे वाक्य के सामने सही (✓) या गलत (X) का निशान लगाइए । (1)

सच्चा मित्र अपने मित्र को अच्छाई की ओर जाने से रोकता है ।

ज) खाली जगह भरो । (1)

ऐसी अवस्था में सच्चा मित्र आशा की किरण बनकर, जीवन के प्रति.....

पैदा करता है ।

झ) समान अर्थ वाला शब्द लिखो । (1)

मित्र =

ञ) विलोम शब्द लिखो । (1)

आशा -

(पाठ्य पुस्तक पर आधारित प्रश्न)

प्रश्न 4 निम्नलिखित प्रश्नों के उत्तर लिखो । (पद्य भाग)

क) अंधेर नगरी का राजा कैसा था ? चुनकर लिखिए । (1)

(बुद्धिमान / शक्तिशाली / अनबूझ)

.....

ख) “वो इधर से निकला, उधर चला गया”

यह बात कौन किसे बता रहा है ? (2)

.....
.....

ग) तुम्हारी परिचित नदी के किनारे क्या-क्या होता है ? (2)

.....
.....

प्रश्न 5 निम्नलिखित प्रश्नों के उत्तर लिखो । (गद्य भाग)

क) “.....आज तो उनके सारे अधिकार छीने जा चुके हैं ।”

अम्मी के अधिकार किस ने छीन लिए थे ? चुनकर लिखिए । (1)

(अब्बा ने / आरिफ और सलीम ने / आपा ने / दादी ने)

.....

ख) स्वामी का अपनी दादी के साथ कैसा रिश्ता था ? (2)

.....
.....

ग) जवाहरलाल, किशन और कुली सभी रस्सी से क्यों बँधे ? (2)

.....
.....

(रचनात्मक लेखन पर आधारित प्रश्न)

प्रश्न 6 क) नीचे लिखे किसी एक विषय पर 75 से 100 शब्दों में एक अनुच्छेद लिखिए । (5)

हफ़्ते में एक बार लगने वाला हाट

या

तुम्हारे घर की खिड़की या दरवाज़े से दिखाई देने वाला बाहर का दृश्य

.....

.....

.....

.....

.....

.....

.....

.....

.....

.....

.....

.....

.....

.....

.....

.....

.....

.....

.....

.....

.....

.....

.....

ख) नीचे लिखे किसी एक विषय पर 75 से 100 शब्दों में एक अनुच्छेद लिखिए ।

(5)

होली का त्योहार या गणतंत्र दिवस

.....

.....

.....

.....

.....

.....

.....

.....

.....

.....

.....

.....

.....

.....

.....

.....

.....

.....

.....

.....

.....

.....

.....

(व्याकरण पर आधारित प्रश्न)

प्रश्न 7 क) नीचे दिए गए वाक्य किस काल में हैं ? चुनकर लिखिए । (3)

(वर्तमान काल / भूतकाल / भविष्यत् काल)

i) जवाहर फुर्ती से बढ़ते जा रहे थे ।

ii) जो भी झूठ कहेगा वह उसे गोली मार देगा ।

iii) उ बा तुन मेज़ के पास बैठ जाता है ।

ख) नीचे दिए गए वाक्यों में से क्रिया शब्द छाँटकर लिखो । (2)

i) नलों में अब पूरे समय पानी नहीं आता ।

ii) दूसरे शिकारी ने जवाब दिया ।

ग) नीचे लिखे वाक्यों में सर्वनाम का ठीक रूप छाँटकर लिखो । (2)

i) सेंटीला घर नागालैंड के किस शहर में है ? (तुम / तुम्हारा)

ii) मोहन को समझ में नहीं आ रहा कि क्या करना चाहिए ? (वह/उसे)

घ) जिन शब्दों के नीचे रेखा खींची है, उनका लिंग पहचानो और लिखो । (2)

(स्त्रीलिंग / पुल्लिंग)

पुलिस की वर्दी ताँबे के सिक्के

ङ) नीचे दिए गए शब्दों के आगे उचित विशेषण चुनकर लिखिए । (गरम / भारी)

i) अटैची ii) हलवा (2)

च) उदाहरण के अनुसार शब्द बनाइए । (2)

उदाहरण - बद + किस्मत - बदकिस्मत

बद + नसीब -

बद + सूरत -

छ) नीचे दिए गए वाक्य में संज्ञा शब्द पर गोला लगाइए । (1)

लेकिन बिशन नहीं रुका ।

ज) नीचे दिए गए मुहावरे का वाक्य में प्रयोग करो । (1)

आँख लगना -

.....

(शब्द ज्ञान पर आधारित)

प्रश्न 8 क) नीचे दिए गए वाक्यांशों के लिए एक - एक शब्द लिखिए । (2)

i) जो शिकार करता है -

ii) सोने के जैसा -

ख) समान अर्थ वाले शब्द लिखिए । (2)

i) पाट = ii) सघन =

ग) उदाहरण अनुसार नए शब्द बनाइए । (2)

उदाहरण- लदाख + ई = लदाखी

i) तिब्बत + ई =

ii) चट्टान + ई =

घ) वर्ग पहेली में से दो पानी के प्राकृतिक स्रोत ढूँढकर लिखिए । (2)

क	ता	व	स
टी	ला	न	मु
अ	ब	दी	प
माँ	झी	ल	कु

i)

ii)

ड) विलोम शब्द लिखिए । (2)

i) बहादुर - ii) सुरक्षित -

(वर्तनी पर आधारित प्रश्न)

प्रश्न 9 क) नीचे लिखे वाक्यों को शुद्ध करके लिखिए । (2)

i) दिन के बारह बजने वाला था ।

.....

ii) पहाड़ों के पीछे से सूरज झाँक रही थी ।

.....

ख) नीचे लिखे शब्दों के अक्षरों के क्रम को बदलकर शुद्ध शब्द बनाओ । (2)

i) दा फू न ल - ii) श र त रा -

ग) निम्नलिखित शब्दों के छूटे हुए अक्षर लिखकर शब्दों को पूरा कीजिए । (3)

i) बै__गाड़ी ii) एका__क iii) आ__मान

घ) नीचे दिए गए शुद्ध शब्दों पर गोला लगाइए । (3)

i) चुनोती चुनौती चूनौती

ii) हीमालय हिमलय हिमालय

iii) मुश्किल मुश्कील मूश्किल

ATOMIC ENERGY EDUCATION SOCIETY

ANNUAL EXAMINATION – 2018-19

Class : V

Time : 3hrs

Subject : Mathematics

Marks :80marks

To be filled by the student

Student's Name : _____

Name of the School : _____

Class / Sec : _____ Roll No. : _____

Date of Examination : _____

To be filled by the teacher

Invigilator's Sign : _____

Examiner's Sign : _____

Marks Obtained : _____

Checker's Sign : _____

General Instructions:

1. All questions are compulsory.
2. The question paper is divided into 4 sections A, B, C and D.
3. Each section carries 20 marks. Each section consists of Very Short Answer Questions (Each one carries 1 mark), Short Answer Questions (Each one carries 2 marks) and Long Answer Questions (Each one carries 4 marks).

Knowledge (20Marks)

A. Choose the correct answer and fill in the blanks.

(6 X 1= 6 Marks)

i) 5 kg and 500 g = _____

- a) 5500 kg b) 55.50 kg c) 5.5 kg

ii) $0.7 \times 3 =$ _____

- a) 2.1 b) 0.21 c) 21

iii) The area of a rectangle of length 90cm and breadth 50cm is _____

- a) 450sq.cm b) 45sq.cm c) 4500sq.cm

iv) If we make different shapes of same perimeter, then _____ shape will have biggest area.

- a) circle b) square c) rectangle

v) We use _____ to record data of variety of things with larger number.

- a) pictures b) tally marks c) numbers

vi) $3456 \times$ _____ $= 3456000$

- a) 100 b) 10 c) 1000

B. Do as directed.

(5x2= 10 Marks)

i) Convert the following.

a) 4 rupees 3paise = _____ paise

b) 2m 87cm = _____ m

c) 7 lit 45ml = _____ lit

d) 6km 500m = _____ m

ii) The distance between New Delhi and Chandigarh is 250 km. It is shown as 2.5 cm on the map. What is the scale used on the map?

iii) Draw a deep drawing of a cube.

iv) What should we look for to check if 100 rupee note is real or fake?

v) A gardener bought 456 mango trees. He wants to plant 15 trees in each row.

How many rows can he plant? How many trees would be left over?

C) Solve the following-

(4 Marks)

The side of a square A is 4 cm. The side of another square B is double the side of square A. Find the area of square A and square B. How many times the area of square B is bigger than the area of square A?

Understanding (20Marks)

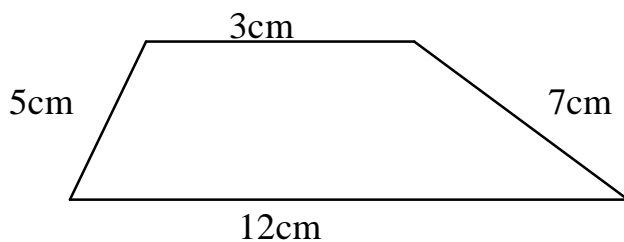
A. Choose the correct answer and fill in the blanks.

(6 X 1= 6 Marks)

i) There were 10 rabbits in the beginning. They grow 10 times every year. The number of rabbits in the second year would be _____

- a) 20 b) 100 c) 200 d) 1000

ii) The perimeter of the following shape is _____



- a) 27cm b) 42cm c) 270cm d) 42sq.cm

iii) The volume of a cube of 2cm edges is _____

- a) 6cu.cm b) 8cu.cm c) 8cm d) 6sq.cm

iv) _____ part of a rupee is 1 paisa.

- a) $\frac{1}{10}$ b) $\frac{1}{100}$ c) $\frac{2}{5}$ d) $\frac{1}{2}$

v) The area of a square of side 12 cm is _____

- a) 144 sq.cm b) 24cu.cm c) 48cm d) 6sq.cm

vi) The water level in a measuring bottle is upto 30ml mark. When a 5-rupee coin is dropped in it, the water level reached upto 33ml mark. Then the volume of the coin is _____.

- a) 33ml b) 30ml c) 3ml d) 3.3ml

B. Do as directed.

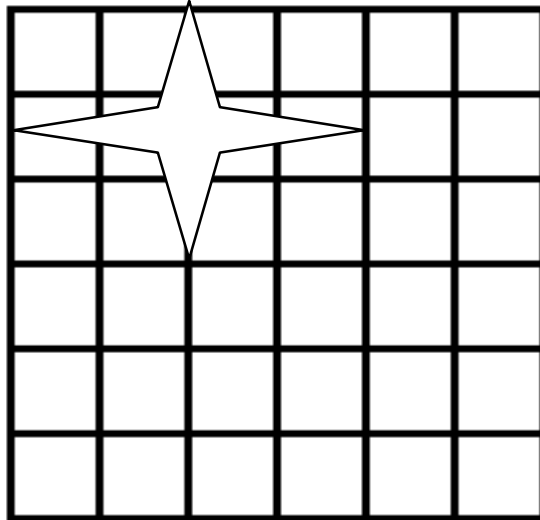

(5x 2= 10 Marks)

i) A farmer sells one litre of milk for Rs.24. In a month he sells 240 liters of milk. How much does he earn in a month?

ii) The weight of a 5 rupee coin is 9 g. How many coins are there in a sack of 5 rupee coins if it weighs 36 kg?

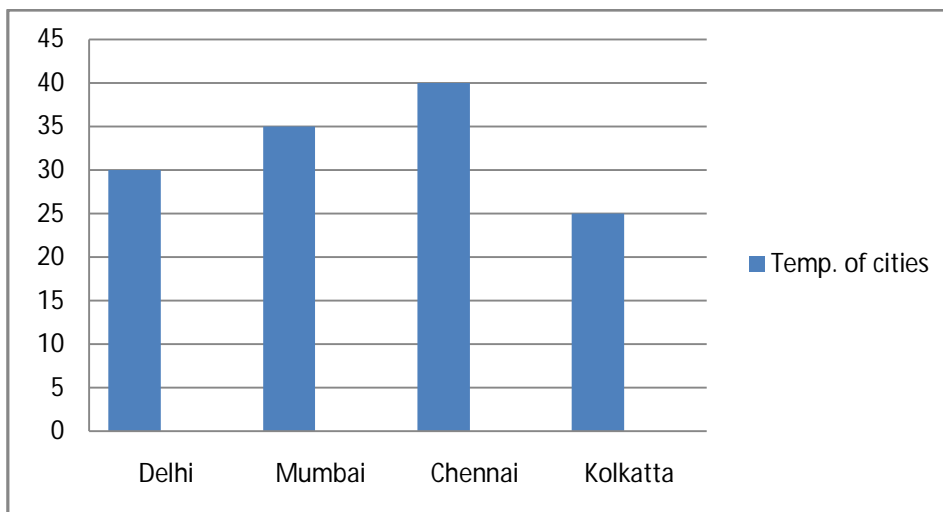
iii) A car mechanic earns Rs 875 every day. How much will he earn in a year?

iv) Star is drawn on 2cm grid. Draw the same figure on $\frac{1}{2}$ cm grid.



v) The given bar chart shows the highest temperature of a day in four cities. Answer the following using the bar chart.

- a) The temperature of Delhi is _____ °c less than the temperature of Chennai.
- b) The temperature of _____ is less than the temperature of Delhi.



C) Solve the following-

i) Shyam plans to tile his kitchen floor with square tiles. Each side of the tile is 9 cm. His kitchen is 810 cm long and 630 cm wide. How many tiles will he need?

(2 Marks)

Tiles along the length = _____

Tiles along the width = _____

Total No. of tiles = _____ X _____

= _____

ii) Gurmeet Kaur had 108 toffees. On her birthday she distributed toffees equally among her 15 friends. She ate remaining toffees . How many toffees did each of her friends get ? How many toffees did Gurmeet eat? **(2 Marks)**

Ability to Compute (20Marks)

A. Fill in the blanks.

(4 Marks)

i) $\frac{1}{10}$ a rupee = _____ paise.

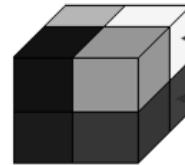
- a) 10 b) 40 c) 20 d) 100

ii) Area of a rectangle is 56sq.m,if its length is 8m then breadth is _____ cm

- a) 60cm b) 400 cm c) 80 cm d) 700 cm.

iii) This model needs _____ cubes to make.

- a) 6 b) 8 c) 20 d) 10



iv) Ratiram is a milkseller. He sells 25litre of milk everyday at Rs. 40 per litre. So he earns _____ rupees in a day.

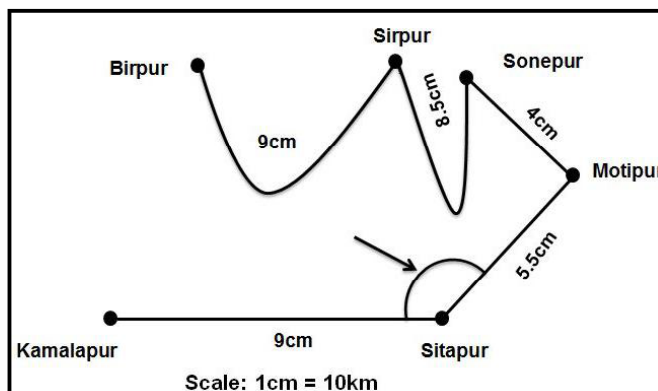
- a) 600 b) 800 c) 2000 d) 1000

B. Do as directed.

(6 X 2= 12 Marks)

i) One pastry weighs 225g. What is the weight of 8 pastries in kg?

ii) Look at the map and answer the following questions.



vi) Jaya has a rectangular lawn. The length of the lawn is twice the breadth of the lawn. If the breadth of the lawn is 6 m, what is its area?

C) Solve the following.

(4 Marks)

A shoebox is 30 cm long, 20 cm wide and 10 cm high. How many such boxes can be packed in a carton of size 1.5 m long, 1 m wide and 1 m deep?

Problem solving (20 Marks)

A. Fill in the blanks.

(4 Marks)

i) The fencing of a square garden is 40m in length .The length of one side of the garden is _____.

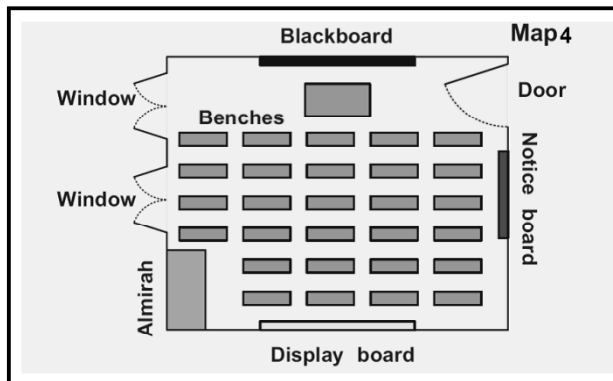
(5 , 20 , 4, 10)

ii)The area of a square is equal to the area of a rectangle of $l= 8$ cm and $b = 2$ cm. The side of the square is _____

(6 cm, 4 cm 8 cm 3 cm.)

iii) If the display board is kept at the south side of the classroom. The notice board is at the _____ side of classroom.

(East , West , North , South)



iv) If 100 one rupee coins weigh 485 g then 1000 coins weigh will be _____ kg .

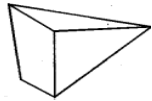
(48.50 kg , 4.850kg, 4850kg. 0.4850kg)

B. Do as directed.


(6 X 2 = 12 Marks)

i) Farooq's father is working in Dubai. He had sent 100 Dinars to Farooq as a birthday gift. Farooq bought a new dress for him for Rs1500. How much money was left with him?

ii) Draw the net of the following solids.



iii) Make a nice diagram on given grid by colour its 0.08 by blue, 0.2 by red, 0.05 by yellow and 0.1 by green.




iv) The students of class XII are going on a trek. They dry the onions and tomatoes to make them light. One kg of tomatoes becomes 100 g when the water inside dries up. If each student needs 10 g of tomatoes a day, how many fresh tomatoes should be dried for 8 days for 10 students?

v) A field needs 100m of wire for fencing. The length of field is 30m. What is the area of the field?






vi) Shyamli bought a battery. She read on it “Life1800hours”. She uses it throughout the day and night. How many days will the battery run?

C) Solve the following.

(4 Marks)

Virat, Pujara, Rishabh, Bumra and Hardik went on a fishing trip. The chart given below shows how many fish each caught. Study the chart and answer the following questions. Each  = 10 fish

Number of fish caught

Virat	
Pujara	
Rishabh	
Bumra	
Hardik	

i) How many fish did Virat catch?

Sol: _____

ii) Who caught more number of fish?

Sol: _____

iii) How many more fish did Bumra catch than Hardik?

Sol: _____

iv) How many fish did they catch altogether?

Sol: _____

Atomic Energy Education Society

Annual Examination - 2018-19

Class : V

Time: 3 Hours

Subject : English

Marks : 80

To be filled by the student

Student's Name : _____

Name of the School : _____

Class / Sec : _____ Roll No : _____

Date of Examination : _____

To be filled by the teacher

Invigilator's Sign : _____

Examiner's Sign : _____

Marks Obtained : _____

Checker's Sign : _____

General Instructions:

1. Marks for questions are indicated against each.
2. Read each question carefully and answer neatly.
3. Ensure that questions for each section are answered.
4. On completion of the Exam, the student must hand over the answer sheet to the invigilator in the Exam room.
5. The student should ensure that the Answer sheet is not damaged or folded.

Section A: Reading (20 marks)

A.1 Read the following passage carefully.

In the city of Cashgar, lived a barber who was a great talker. Once the Sultan called the barber to shave his head. The barber started talking non-stop instead of shaving him. The Sultan got angry.

“When are you going to stop and begin to do your work?”

The barber replied, “You do me an injury by calling me a chatterer. For, everyone says I am very quiet. I have six brothers whom you might call chatterers. Their names are Bacbone (buck-bon), Bakbarea (buk-buria), Bakbac (Buk-buk), Alcouz (ul-kooz), Alnaschee (ul-nashi) , Schacabac (sha-ka-bak). One is humpbacked, one is toothless, one is half blind, one is quite blind, one is deaf and the other has a defect in his speech and they are all great talkers, but I am the youngest of my family, and I am very quiet and sparing with words.”

A1.1 Answer the following questions.

(1x3=3)

a) What did the barber do when Sultan called him to shave his head?

b) What was the nature of the barber according to him?

c) Who were chatterers according to the barber?

A1.2. Find out from the passage.

(1x2=2)

a) the word which means *a fault*. _____

b) antonym of ‘*the eldest*’ _____

A.2. Read the following passage and answer the following questions given below.

“Don’t you like it? said all the creatures in surprise. “Why, we were told you would love to see us because you were a champion pincher and pricker yourself. Come, come join in the fun!”

Hari leapt to his feet, crying loudly. His lunch rolled into the pool, and when the crabs and lobsters saw it, they ran to it and began to feast eagerly. Hari saw that they had forgotten him for a time, and he turned and ran for his life, tears streaming down his cheeks.

“ They only did to me what I keep doing to the other children.” he thought. “But how it hurt! And how I hated those crabs and lobsters! I suppose the other children hate me too. Well, I jolly well shan’t pinch or prick anymore.”

A.2 Multiple choice questions

A.2.1 Choose the correct answer and write in the blanks. (1 X 3 = 3)

1) Hari was a champion pincher and _____
i) player ii) cricketer iii) pricker

2) Hari’s lunch rolled into the _____
i) sea ii) pool iii) river

3) Hari decided that he would _____
i) not pinch or prick anyone ii) continue to pinch and prick
iii) leave his school and go

A.2.2 Do as directed. (1 X 2 = 2)

1) Find the word from the passage which means –
a large meal _____

2) Write the full form of ‘shan’t ‘ _____

A3. Read the following passage with care.

On 2 October, 2014, Swachh Bharat Mission was launched throughout the length and breadth of the country as a National Movement. While leading the mass movement for cleanliness, the Prime Minister encouraged people to fulfill Mahatma Gandhi's dream of a clean and hygienic India.

The Prime Minister himself initiated the cleanliness drive at the Mandir Marg Police Station. Picking up the broom to clean the dirt, the Prime Minister asked people neither to litter, nor let others litter. He gave the mantra of '*Na gandagi karenge, Na karne denge*'.

He also invited nine people to join the cleanliness drive and requested each of them to draw nine more into the initiative. By inviting people to participate in the drive, the *Swachh Bharat Abhiyan* has turned into a national movement. A sense of responsibility has been evoked among the people through the Clean India Movement. With citizens now becoming active participants in Cleanliness activities across the nation, the dream of a 'Clean India' once dreamt by Mahatma Gandhi has begun to get a shape.

A3.1. Tick the correct option and write it in the space provided. (1x4=4)

- 1) The Swachh Bharat Mission was launched throughout the
- | | |
|------------------------------------|---------------------------|
| a. part of the country | b. south of the country |
| c. length & breadth of the country | d. borders of the country |
-

- 2) The Mantra of Swachh Bharat Mission is
- | |
|---|
| a. Gandagi karenge or karne denge. |
| b. Gandagi karenge par karne nahin denge. |
| c. Gandagi nahi karenge par karne denge. |
| d. Na gandagi karenge, na karne denge. |
-

Section B: Textual questions (10 marks)

B1. Answer the following questions

(1x2=2)

1. Who was very quiet in the class during class discussion?

2. Why did Gulliver's captain send some sailors to the land?

B2. Answer the following questions

(4x2=8)

1. Why is Topsy - Turvy Land referred to as an Upside - Down Land?

2. How did Passepartout help in getting the Red Indians off the train?

3. What kind of child was Sanatombi?

4. Where are crowds of people seen?

Section D-Grammar (15 Marks)

D.1 Do as directed

D.1.1 Write the antonyms of the following using 'un / im/ dis (1)

i) polite _____ ii) respect _____

D.1.2 Fill in the blanks with words given in the bracket (2)

i) Please keep quiet _____ the teacher comes to class. (so / till)

ii). I cleaned the room _____ my sister cooked food. (while/if)

D.1.3 Rearrange the words to make a meaningful sentence. (1)

always to listens he mother his

D.1.4 Punctuate the following (1)

did leena go to mumbai

D.1.5 Write a suitable describing word in each of the blanks (2)

i) Apple is juicy. Orange is juicier than apple.

Sugar cane is the _____ of all.

ii) The sailboat is fast. The car is faster than the sailboat.

The air plane is the _____ of all.

D.1.6 Write the full forms of: (2)

i) wouldn't _____ ii) won't _____

D.1.7 Fill in the blanks with a/ an /the (2)

i) He saw _____ big crab coming towards him.

ii) _____ sea creatures ate his food.

D.1.8 Change the word in the brackets suitably and fill in the blanks. (2)

i) Shama ate _____(quick) and got ready for school.

ii) I always do my work _____. (neat)

D.1.9 Fill in the blanks with the most appropriate form of words given

in the brackets. (2)

i) I was trying to climb over the fence when the giant _____ me. (see, saw, seen)

ii) _____ he was suffering from fever, he could not write the examination
(since, although, but)

Section E- Vocabulary (10 MARKS)

E.1 Choose the word from the brackets that matches with list below.

(defend, astonishment , subway , chatterer) (4)

a) underground passage for people to cross : _____

b) to protect from attack : _____

c) to be greatly surprised : _____

d) someone who talks a lot : _____

E.2. Write another word for: (1x2=2)

a) surround -- _____ (close , disclose , enclose)

b) nipped -- _____ (pinched , pricked, troubled)

E.3. Write a phrase as shown in the example : (1)

Example- **deep** canyons

E.4. Create your own comparison for the following:- (1x2=2)

a) I felt as light as _____ after exercising.

b) The old man's hair is as white as _____.

E.5. Write rhyming words: (1/2 X2=1)

a) pleasure , treasure, _____

b) wear, tear, _____

Section F: Spelling (10 marks)

F1. Circle the word with correct spelling:- (1x4=4)

F1.1 a) otobiographi b) autobiographe c) autobiography

F1.2 a) exosted b) exhoused c) exhausted

F1.3 a) passengers b) pasengers c) passangers

F1.4 a) astounishment b) astonisment c) astonishment

F.2 Identify the misspelt words and spell them correctly (1/2 X 4 = 2)

bruise appel beloved apran gaint barbar
