

**ATOMIC ENERGY EDUCATION SOCIETY
TERM-I EXAMINATION (2017-18)
PRACTICE SHEET**

SUBJECT – ENGLISH

CLASS – IV

NAME : _____

Marks-80

TIME – 3 Hours

ROLL NO. : _____

A.1 Choose the correct word and fill in the blanks.

(1x5=5)

- a). Hiawatha was a _____ boy. (little / big)
- b). He learnt every bird's _____ (language / colour)
- c). I eat everything _____ spinach (except / accept)
- d). The _____ is a ferocious animal. (beer / bear)
- e). _____ is a place where people keep money. (Bank / ATM)

A.2 Match the words in column 'A' with the words in column 'B'.

(1x5=5)

- | | |
|--------------|-------------------------|
| 1. Wallop | unpleasant situation |
| 2. Cruel | Suffering to somebody |
| 3. Coward | Shy and nervous |
| 4. Timid | Pleasant taste or smell |
| 5. Delicious | something hard |

A.3 Rearrange the letters

(1/2 x 6=3)

- | | |
|----------------------|-------------------|
| a). Notgue - _____ | d). ttruh - _____ |
| b). Eaalngug - _____ | e). tnigh - _____ |
| c). Tnupdi- _____ | f). PPyah – _____ |

A.4 Write 'True' or 'False' against the following statements-

(1x3=3)

- a). The lady whipped the pony. ()
- b). Drinking water is not good for health. ()
- c). Paper floated in water. ()

A.5 Who said these words and to whom?

(1x3=3)

- a. "Stop! You're tickling me."
_____ said to _____
- b. Wake up, dear ! wake up fast!
_____ said to _____
- c. "I'm glad to be a real boy. I'll never lie again"
_____ said to _____

A.6 Answer the question in one sentence.

(2x3=6)

1. What is a library ?

2. What did the boy and girl buy?

3. Do you like puppets ? Have you ever seen a puppet show?

A.7 Answer in one word-

(1x2=2)

a). A young Red Indian boy who lived with his grandmother _____.

b). The Pundit's mother tongue _____.

A.8 complete the questions with using why, who, how, where, what?

(1/2 x 4=2)

1. _____ took the challenge? What did he do?

2. _____ should the plants be watered?

3. _____ kind of books do you like?

4. _____ old are you?

A.9 Answer the following.

(2x3=6)

1. Write any six sentences about Pinocchio?

2. Trees are very useful. Write any 5 uses of the trees.

B.1 Read the following passage carefully and answer the question given below.

One day a strange person arrived in Hamelin. He was tall and thin, with a long and serious face. He wore a coat of many colours and a tall, red hat on his head. In his hand he had a long thin pipe. He walked through the narrow streets of the town, straight to the Mayor's office. "Who are you?", asked the Mayor. "I am the pied piper", replied the man.

B1.1 Fill in the blanks-**(1x2=2)**

a. The name of the town was _____.

b. The man walked through _____.

B1.2 Answer the following-**(1x2=2)**

a. What did he have in his hand?

b. Who was the strange person?

c. Write the rhyming words of -**($\frac{1}{2}$ x4=2)**

He- - _____

Coat - _____

Hat- - _____

pipe - _____

B1.3 Write the opposite of -**(1x4=4)**

1. day - _____

2. Tall - _____

3. In - _____

4. Straight - _____

B2 Read the following Poem carefully.

The king was sick. His cheek was red,
 and his eye was clear and bright:
 he ate and drank with a kingly zest,
 And peacefully snored at night.
 But he said he was sick, and a king should know.
 And doctors came by the score;
 They did not cure him. He cut off their heads
 And sent to the schools for more.
 At last two famous doctors came.
 And one was poor as a rat;
 He had passed his life in studious toil.
 And never found time to grow fat.
 The other had never looked in a book;
 His patients gave him no trouble;
 If they recovered they paid him well,
 If they died, their heirs paid double.

B2.1 Answer the questions-

(1x4=4)

1. How did the king eat?

2. The king used to have a sound sleep at night. (True / False)

3. King's eye was red. (True /False)

4. which of the following words in the poem rhymes with 'Cure'?

1. More 2. Zest 3. Pure 4. Bright

B2.2 Fill in the blanks-

(1x3=3)

1. Doctors came by the _____.

2. He had passed his _____ in studious toil.

3. Write the opposite of the underline word.

a. The doctor ate many apples.

The doctor ate _____ apples.

B.3 Look at the picture and write 4 sentences.

(1x4=4)



B.4 Name the language the people different states speak in our country

(1/2 x8=4)

1. This language is spoken in Rajasthan R_____.
2. It is spoken in Orissa O_____.
3. This is our national language H_____.
4. The language of the Goan people K_____.
5. This is spoken in Tamil Nadu T_____.
6. It is widely spoken in Uttar Pradesh and else where U_____.
7. It is spoken in Haryana H_____.
8. This is spoken in Kolkata B_____.

SECTION-C (Application)

C1 Choose the correct option and fill in the blanks.

(1/2 x 6=3)

1. She has so many _____ (book / books).
2. My father gave me a piece of _____ (Bread / Bleed).
3. I wrote _____ to my friend (letters / letter).
4. My _____ falls on 13th of August. (birthday / birthdays).
5. The short form of does not is _____ (don't / doesn't).
6. The king and queen sits on the _____ (throne / thrown).

C.2 Rearrange the following words and make a meaningful sentences.

(1x4=4)

a) Puzzled / the /was / voice/ old / the / by / man.

_____.

b) Cow / milkman's / bad /was / the / in / mood / a.

_____.

c) movie / book / and / the / similar / the / are.

_____.

d) many / could / speak / He / language / fluently.

_____.

C.2.1 Punctuate it.

(1x2=2)

1. what is the colour of the rainbow.

_____.

2. when everyone failed the challenge was taken up by birbal.

_____.

C.2.2 Make sentences (any 5)

(1x5=5)

a) Fast _____

b) Laugh _____

c) Punish _____

d) Feather _____

e) Sound _____

f) Queer _____

C.2.3 Write the Plurals of the following words-

($\frac{1}{2}$ x 8=4)

1. Tax - _____ 4. Mouse - _____ 7. Goose - _____

2. Branch - _____ 5. Wolf - _____ 8. People - _____

3. Piano - _____ 6 Woman - _____

C.2.4 Rewrite the sentences changing the underlined words to their opposites

(1x 2=1)

(a) It was late in the evening.

_____.

(b) Hari is very cruel boy.

_____.

प्र.1 नीचे दिए गए गद्यांश को पढ़कर पूछे गए प्रश्नों के उत्तर लिखो ।

हुदहुद का सारा शरीर रंग-बिरंगा और चटकीला होता है । पंख काले-काले होते हैं जिन पर मोटी सफ़ेद धारियाँ बनी होती हैं । गर्दन का अगला हिस्सा बादामी रंग का होता है । चोटी भी बादामी रंग की होती है, मगर उसके सिरे काले और सफ़ेद होते हैं । दुम का भीतरी हिस्सा सफ़ेद और बाहरी काले रंग का होता है । चोंच पतली, लंबी तथा तीखी होती है । इस चोंच से यह आसानी से ज़मीन के भीतर छिपे हुए कीड़े-मकोड़ों को ढूँढ निकालता है । इसकी चोंच नाखून काटने वाली 'नहरनी' से बहुत मिलती है और शायद इसीलिए कहीं-कहीं इसे 'हजामिन' चिड़िया के नाम से भी पुकारते हैं ।

1- हुदहुद का शरीर कैसा होता है ? 1

2- इसकी गर्दन का अगला हिस्सा किस रंग का होता है ? 1

3- हुदहुद को 'हजामिन' चिड़िया के नाम से क्यों पुकारते हैं ? 2

4- सही विकल्प पर सही का निशान लगाओ ।

(क) हुदहुद के पंखों पर किस रंग की मोटी धारियाँ बनी होती हैं ? 1

बादामी काली सफ़ेद

(ख) इसकी चोटी के सिरे किस रंग के होते हैं ? 1

काले और सफ़ेद सफ़ेद और बादामी काले और बादामी

5- विपरीत अर्थ वाले शब्द लिखो । 2

अगला - _____ पतली - _____

6- वचन बदलो । 2

धारी - _____ चोटी - _____

प्र.2 अपठित गद्यांश को पढ़कर पूछे गए प्रश्नों के उत्तर लिखो ।

जीवन एक पाठशाला है । जिसमें अनुभवों के आधार पर हम शिक्षा पाते हैं। शिक्षा के द्वारा ही मनुष्य अपना सम्पूर्ण विकास कर सकता है । जीवन लक्ष्य की पूर्ति के लिए शिक्षा अति आवश्यक है। शिक्षा का हमारे जीवन में महत्वपूर्ण स्थान है । डॉ. राधाकृष्णन भी मनुष्य को सही अर्थों में मनुष्य बनाने के लिए शिक्षा को सबसे अधिक आवश्यक मानते थे। उनके अनुसार - शिक्षा वह है, जो मनुष्य को ज्ञान प्रदान करने के साथ-साथ उसके हृदय एवं आत्मा का विकास करती है। शिक्षा व्यक्ति को समाज और राष्ट्र के विकास के लिए प्रेरित करती है । विदेशी भाषा में भारतीय मौलिक चिंतन नहीं कर सकते । शिक्षा का माध्यम मातृभाषा में होना चाहिए क्योंकि इससे बालक स्वाभाविक रूप से सीख पाता है ।

1- जीवन लक्ष्य की पूर्ति के लिए क्या आवश्यक है ? 2

2- शिक्षा व्यक्ति को किस के लिए प्रेरित करती है । 2

3- शिक्षा का माध्यम मातृभाषा में क्यों होना चाहिए ? 2

4- अनुच्छेद में से विलोम शब्द छाँटकर लिखो । 2

स्वदेशी - ----- कम - -----

5- खाली जगह भरो । 2

(1) जीवन एक ----- है ।

(2) शिक्षा का हमारे जीवन में ----- स्थान है।

प्र.3 सही विकल्प पर सही का निशान लगाओ । 1X5=5

1- राजभंडार की देखभाल की जिम्मेदारी किसकी थी ?

(क) मंत्री की (ख) राजा की (ग) जनता की (घ) भंडारी की

2- किस चीज़ को कुतरा जा सकता है ?

(क) स्याही को (ख) पानी को (ग) चप्पल को (घ) दूध को

3- चुन्नू ने दाल को पहले कैसा बताया ?

(क) मीठा (ख) कड़वा (ग) खट्टा (घ) तीखा

4- सुनीता बाज़ार क्या लेने गई थी ?

(क) चावल (ख) चीनी (ग) आचार (घ) खिलौने

5- बिन्नी कौन थी ?

(क) गाय (ख) बकरी (ग) भेड़ (घ) भैंस

प्र.4 नीचे लिखे प्रश्नों के उत्तर एक वाक्य में लिखो -

क - 'कौन' कविता में किसकी शैतानियों की बात कही गई है ? 2

ख - गांधी जी ने अहमदाबाद के पास कौन-सा आश्रम बनाया ? 2

ग - बच्चों ने खाने-पीने की चीज़ें छीकें में क्यों रखी ? 2

घ - पढ़कू हमेशा क्या पढ़ता रहता था ? 2

ड. - जो बच्चे देख नहीं सकते, वे किस तरह की किताबें पढ़ सकते हैं ? 2

प्र.5

1- इस शब्द के दो-दो अर्थ हैं । इनका प्रयोग करते हुए वाक्य बनाओ । 2

पूर्व 1 -----

2 -----

-
- _____

- - ?

-

- - ?

- , - ?

2

- ' ' ?

3

- ?



प्र.8 भीखुभाई के बारे में पाँच वाक्य लिखो ।

5

प्र.9 अशुद्ध शब्दों को शुद्ध करो ।

1X2=2

मालीक - वयवहार -

प्र.10 तुक मिलाओ ।

1X2=2

धाता - पन्ने -

प्र.11 इन वाक्यों को अपने शब्दों में लिखो ।

1X2=2

(क) दान के वक्त उनकी मुट्ठी बंद हो जाती थी ।

(ख) संन्यासी की बात सुनकर सभी की जान में जान आई ।

प्र.12 नीचे लिखे शब्दों का वाक्यों में प्रयोग करो ।

1X2=2

सत्याग्रह -

तर्कशास्त्र -

प्र.13 इन मुहावरों का वाक्यों में प्रयोग करो ।

1X2=2

दिन-रात एक करना -

राहत की साँस लेना -

प्र.14 सुलेख लिखो ।

5

एक छोटा-सा गाँव था । गाँव के पास एक नदी बहती थी । उस नदी पर एक छोटा पुल बना हुआ था । वह पुल बहुत तंग और छोटा था । उस पर से एक समय में एक ही आदमी जा सकता था । एक बार एक बकरी उस पुल पर से आ रही थी । दूसरी तरफ़ से एक और बकरी चली आई । वे दोनों पुल के बीचों-बीच एक-दूसरे के सामने आकर खड़ी हो गई ।

UNDERSTANDING BASIC CONCEPT (20MARKS)

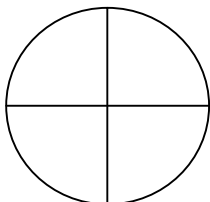
Q.1 Arrange numbers from 4 to 12 once in given box in this way that add from each side(diagonal, vertical, horizontal) will be 24.

Q.2. Continue the pattern.

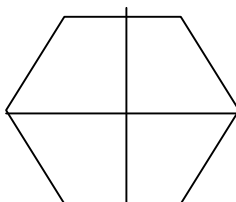
3	4	5	6	18
4	5	6	7	22
				26

Q.3. You have to distribute 96 oranges equally in 3 baskets. How many oranges will there be in each basket?

Q.4. Shade the given figures according to the fractions:



$\frac{1}{4}$



$\frac{3}{4}$

Q.5. Arrange in two different ways in rows and columns:

a) 15 apples		
b) 28 balls		

Q.6. Frame your question:

(i) There are 10 packets of sugar. Arun paid 100 rupees for all the packets.

Question: _____

Q.7. Make the multiplication table of 13 using any two multiplication tables:

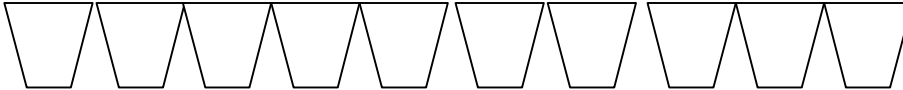
Table of - 



Table of - 

Table of 13 - 

Q.8. Anu wants change for Rs.2000

How many notes will she get if she wants change?

- a) All 50 rupee notes? _____
- b) All 10 rupee notes ? _____
- c) All 20 rupee notes? _____
- d) All 5 rupee notes ? _____

Q.9. Divide and find the quotient:

a) $655 / 5 =$

b) $981/9 =$

Q.10. Write in columns and subtract:

(a) 38kg 500g from 45kg 250g

(b) 79kg 759g from 91kg 60g

ABILITY TO COMPUTE (20MARKS)

Q.1. Solve these:

(a) A vegetable - seller had 25kg of onions. He sold 20kg 250g. How much onions are left with him? 3m

(b) Mrs. Kapoor has 2KG OF NEEM POWDER. She wants to put it into smaller packets of 200g each. How many packets will she get? 3m

(c) A square shaped garden's one side is 200m long. How much wire will be needed for fencing around it 3 times? 3m

(d) X runs a circular play ground of length 103m and 55cm and Y runs a play ground of length 97m and 85cm. What is difference in distance? 3m

(e) Find the product of (use box method):- 3m
 65×35

(f) Add the following in columns: 3m

(i) 13 kg 750g and 24 kg 500 g (ii) 5 kg 5g and 7kg 17g

(g) You are given the following weights. Using these weights you have to weigh out different amount of certain items. Which weights will you use? 2m

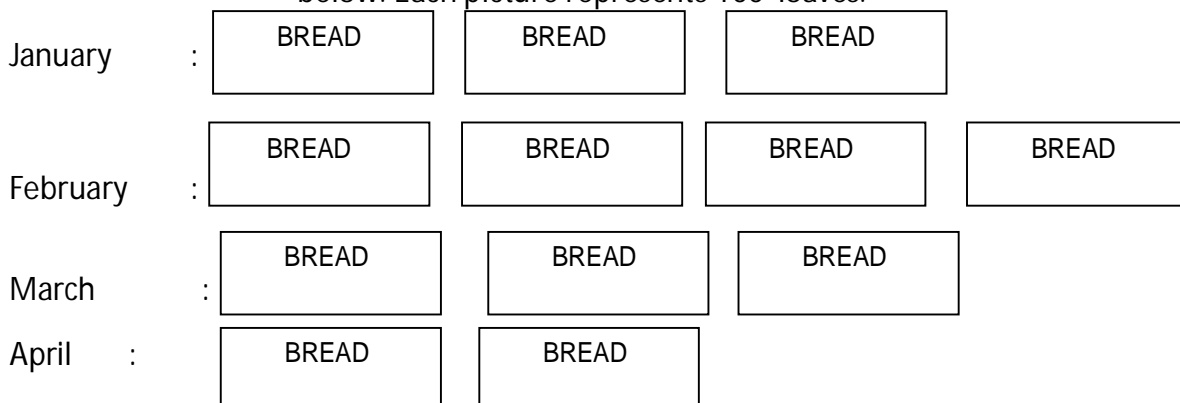
Amount to be- 1 kg 500g 200g 100g 50g Weighed

1kg 750 g

2kg

PROBLEM SOLVING ABILITY(20MARKS)

Q.1. The Number of loaves of bread baked in a bakery in four different months of a year are given below. Each picture represents 100 loaves.



Answer the following questions:

1) Name the months in which the number of loaves baked was the same?-

2) How many loaves were baked in January? _____

3) In which month the number of loaves baked was minimum? ?

4) What is the number of loaves baked in all the four months? _____

Q.2. Ram walks around a square field of length 6m and 25cm and Tanish walk around a rectangular field of length 4m 80cm and breadth of 5m 10 cm. Who walks a greater distance and by how much?

Q.3. Raju collects 112 sea shells to make necklaces for his sisters. He requires 28 sea shells to make a necklace. How many necklaces did he make? (Use repeated subtraction method.)

Q.4. Gangu made sweets for Diwali. He had 80 laddoos. He packs 4 laddoos in each small packet.

a) How many packets did he make? _____

b) If he packs, 20 laddoos in bigger packets how many packets does he get?

Q.5. Show Rs.45 in 4 different ways by using Re.1, Rs.2, Rs.5 and Rs.10.

Ans.

Q.6. Arrange 3 squares each side of 1cm in 4 different ways and found their perimeter.


Q.7.

Weight of parcel	Cost of stamps
Up to 50 grams	Rs.30
Every additional 50 grams	Rs. 7

a) Ram wants to send a parcel weighing 270 grams. How many rupees stamps will he put on the parcel?

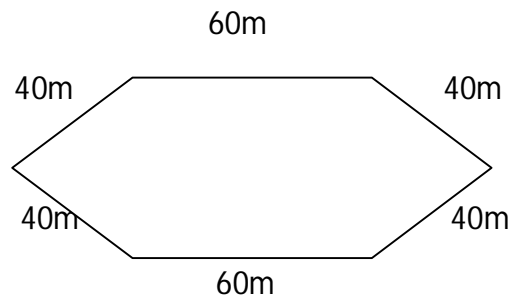
b) Maximum how many grams parcel a person can sent in Rs.65?

Q.8. Make a pattern by using



Q.9. There are 60 students in a class. 30 students like football, 15 students like hockey and rest of students like badminton. Show given data in pie chart.

Q.10



Find the boundary of given field. _____

If the cost of fencing is Rs 25 per meter. How much does it cost to fence the fields? _____

CLASS:4

EVS

TIME:3HOURS

Name : _____

Roll No _____

Date: _____

Sign. of Invigilator: _____

Max. Marks : 80

Marks Obtained : _____

1.Fill up the blanks with the suitable answer given in the brackets. (5x1=5)

- 1) _____ is the harvest festival which is celebrated in Assam. (Pongal, Holi, Bihu)
- 2) Potato is the _____ of the plant.(stem, root, fruit)
- 3)_____ does not make its own nest, it lay eggs in a crow's nest. (Sparrow, Weaverbird, Koel)
- 4) The language written in Abu-Dhabi currency is_____ (English, Arabic, French)
- 5) Mukhtapur village is in the -----town of Andhra Pradesh. (Pochampalli, Hyderabad)

2.True/false (1x5=5)

- 1) Peacock is our national bird
- 2) Some birds use their feet to hold branches of the tree
- 3) Snakes chew their food with their teeth
- 4) The women were dressed in yellow to celebrate Bihu festival
- 5) Before ardaas kadah Prasad was distributed.

3. Write the name of : (1x5)

- Two Indoor games _____
- Two fruits with smooth surface _____
- Two vegetables that can be eaten raw _____
- Two cartoon watched by you _____
- An animal with sharp teeth _____

4.Choose and write the answer from the help box:- (1x5= 5)

(Australia, Koel, turmeric, soaked, barbet)

- (1)_____ lays egg in the nest of crow.
- (2) Coppersmith bird is also called_____
- (3)Desert oak tree is found in _____
- (4)_____ is used to make the food yellow
- (5) Only _____ seeds give rise to new plants.

5. Answer the following in one or two sentences. (1x5= 5)

1. How does Chuskit go to school?

2. How many commands will be given over the entire parade?

3. What are Sand dunes?

4. What is Bhelaghar?

5. People in defense service like Navy, Air force and Army wear uniform. Name four other jobs where people wear uniform.

6. Give Reasons:

(1x5= 5)

Why did government start mid -day- meal?

Why was Akshay confused?

Why are weavers giving up their crafts?

Why should we removed weeds from the fields?

Why does babuji sell previous day vegetables first?

7. Write the steps involved in the cultivation of onion crops.

(2 ½ x1=2 ½)

8. Strike off the wrong answer and fill in the blanks with correct answer.

(1x5=5)

- _____asked chuskit not to dream.(Meme-le, Amma-le)
- _____ commands have to be given in a passing out parade.(36, 34)
- _____is helpful for toothache.(clove, aniseed)
- _____is the local language of the Abu Dhabi.(Urdu, Arabic)
- In the _____vegetables dry very quickly.(Summer, Winter)

9. Find the name by jumbling the letter

(1x4=4)

- A person who cannot speak U M D B _____
- A person cannot walk A M L E _____
- A person who cannot see L B I D N _____
- A person who cannot hear E D F A _____

10. Write a short note on Abu-Dhabi.

(2 ½ x1=2 ½)

11. Mark and colour the following in the given India Political map.

(½x5=2 ½)

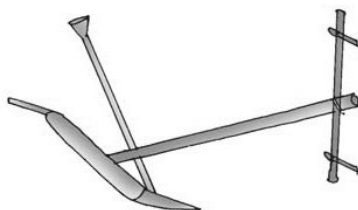
- a) State in which Pochampalli is situated.
- b) Maharashtra
- c) State in which Bihu festival is celebrated.
- d) Karnataka
- e)

Jammu and
Kashmir



12. Observe the picture and answer the questions related to the picture.


(2x5=10)



1. Name the iron tool used in the picture.

What is its use? _____

2. Write the name of the spice shown in the picture. What is its medicinal value?

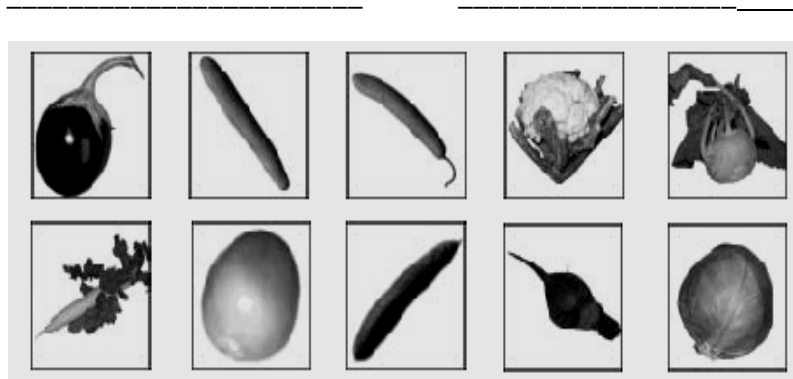


3. Write the number in this 10-rupee currency note.

Which bank prints this currency note? _____



4. In the adjacent picture write any two roots of the plant which we use as a vegetable.



5. Write the names of the birds shown in the adjacent picture.



A. _____

B. _____

13. Write how do people celebrate Bihu?

($\frac{1}{2} \times 5 = 2 \frac{1}{2}$)

14. Choose the correct answer from the bracket and fill in the blanks: (1x5=5)

- _____ is an iron rod used to dig and loosen the soil. (Khunti, Kurige)
- We lose lot of _____ when we have diarrhea and vomiting. (Water, Blood)
- Manjit uncle was making the _____. (Langar, Kadah Prasad)
- _____ is small and round like a pearl. (Aniseed, Black Pepper)
- Wahida Prism is a _____ in Indian Navy. (Doctor, Policeman)

15. Strike off the word which does not belong to the group:- (1x5=5)

Cricket	football	Hockey	Tree
Lion	Sparrow	Parrot	Crow
Carrot	Grapes	Radish	Potato
Bus	Auto rickshaw	Boat	Car
Blackpepper	Turmeric	Cumminseed	Neem

16.who I am? write my name.:- (1x4=4)

I look like a nail but brown like a chocolate
I soothe in the toothache



I look like green Zeera and useful in stomach pain



I am round like a pearl my color is black. I can make your food spicy




I am red hot and spicy I am used in powdered form to make vegetable tasty



17. Identify the picture and tick the correct answer:

(1x2=2)



(Water Fall / Snow Fall)

(Gurudwara / Masjid)

18. Answer the following in one or two sentences:-

(1x3=3)

What is the meaning of the word PRISM?

What is langar?

Find out where Ladakh is? What kind of place it is?

19. Draw a bird's feet:-

(2x1=2)

i) which swims in water

ii) which walks on land