

**ATOMIC ENERGY CENTRAL SCHOOL No.-4, RAWATBHATA**

**Periodic Test – 1 (2018-19)**

**Subject : English**

**Class – V**

**Section : \_\_\_\_\_**

**Date: 19/07/2018**

**Name of the student : \_\_\_\_\_**

**Roll No: \_\_\_\_\_**

**Invigilator's sign: \_\_\_\_\_**

**Time - 1½ Hours**

**Examiner's sign: \_\_\_\_\_**

**MM : 40 MO : \_\_\_\_\_**

Q.1 Match the words with their meaning

5

- |            |                            |
|------------|----------------------------|
| 1. Blaze   | A. a cooked dish           |
| 2. Cluster | B. a group of birds        |
| 3. Surrey  | C. a bright flame          |
| 4. Curry   | D. look over, inspect      |
| 5. Flock   | E. group of similar things |

Q.2 State whether the following statement is true or false.

5

- |   |       |
|---|-------|
| 1. The curry was made from the short of the bamboo. | _____ |
| 2. He has chilled frosty-fizz to drink too.         | _____ |
| 3. Maharaja was from Travancore.                    | _____ |
| 4. All game Don't need teamwork to win.             | _____ |
| 5. Wise means intelligent                           | _____ |

Q.3 Answer the question about yourself.

3

1. What language do you speak?

---

2. Which country do you belong?

---

3. How old are you?

---

Q. 4 Fill in the blank with preposition.

5

1. The frog jumped \_\_\_\_\_ the well.

2. He noticed the creeper \_\_\_\_\_ the foot of the tree.

3. We are going out \_\_\_\_\_ a week.

4. He travels to school \_\_\_\_\_ bus.

5. The boy is sitting \_\_\_\_\_ the tree.

Q.5 Write the contractions for following

2

1. She will = \_\_\_\_\_

2. Does not = \_\_\_\_\_

3. Is not = \_\_\_\_\_

4. Do not = \_\_\_\_\_

Q.6 Fill in the blanks with words with words by adding suffix ( use following words )

3

(-d, -ed, -ing, -er, -est )

1. Gita is \_\_\_\_\_to learn skating (try)
2. My brother is \_\_\_\_\_than me (short)
3. Old bird (goose) is \_\_\_\_\_than geese ( wise )

Q.7 A) Answer the following questions in short

5

1. Who feels joyful on seeing the ice-cream man?

---

---

---

2. Why did the maharaja go into the kitchen in the afternoon?

---

---

---

3. Where did the geese live?

---

---

---

Q.7 B) Rearrange the sentence

2

1. pointed / She / at / cocount / the / tree.

---

2. Don't / a book / judge / its / by / cover.

---

Q.8 Who said to whom and why ?

3

“ So this is where the wild geese live. ”

a. Who said this? \_\_\_\_\_

b. To whom was it said? \_\_\_\_\_

c. When was it said? \_\_\_\_\_

Q.9 Read the following passage and answer the following questions.

5

The Ant and the Dove

On his way home. An ant saw a sparkling fountain. He crawled on to its wall to take a closer look

Suddenly he slipped and fell into the water. He gurgled and panicked and waved his legs in the air. “Help! I can’t swim,” he cried. Luckily, just at that moment, a friendly dove flew by. She saw that the tiny ant was drowning and quickly flew to a nearby tree.

She pulled off a leaf and let it glide down to the ant. “Here you are,” she cooed, and flew away

1. Why do you think the dove helped the ant?

---

---

2. How did the dove help the ant?

---

---

3. What is the colour of ant?

---

---

4. Frame the question for the following.

A) It eats sugar

---

B) It has two long antennae.

---

Q.10 Read the following poem and answer the following questions.

4

When summer's in the city,  
And brick's a blaze of heat,  
The Ice-cream Man with his little cart  
Goes trundling down the street.  
Beneath his round umbrella,  
Oh, what a joyful sight,  
To see him fill the cones with mounds  
Of cooling brown and white:  
Vanilla, chocolate, strawberry,  
Or chilly things to drink

From bottles full of frosty-fizz,  
Green, orange, white, or pink.  
His cart might be a flower bed,  
Of roses and sweet peas,  
The way the children cluster round  
As thick as honeybees.

RACHEL FIELD

1. Name the different flavors of ice-cream.

---

---

2. Name the five colours mentioned in the poem.

---

---

3. Write the rhyming words any 2 pairs from given poem.

2


1) \_\_\_\_\_

2) \_\_\_\_\_

परमाणु ऊर्जा केंद्रीय विद्यालय क्र. - 4, रावतभाटा

प्रथम सामयिक परीक्षा (2018-19)

विषय : हिन्दी



कक्षा – पाँचवीं

अनुभाग : \_\_\_\_\_

दिनांक : 16/07/2018

विद्यार्थी का नाम : \_\_\_\_\_

अनुक्रमांक : \_\_\_\_\_

निरीक्षक के हस्ताक्षर : \_\_\_\_\_

समय : 90 मिनट

परीक्षक के हस्ताक्षर : \_\_\_\_\_

पूर्णांक : 40 प्राप्तांक : \_\_\_\_\_

प्रश्न 1. किन्हीं दो चीजों के नाम लिखो जिनसे तेल बनता हो । 1

उत्तर - \_\_\_\_\_

प्रश्न 2. किन्हीं दो खेलों के नाम लिखो जिन्हें तुम अपने दोस्तों के साथ खेलते हो । 1

उत्तर - \_\_\_\_\_

प्रश्न 3. राम, कौशल्या और ताड़का किस प्रसिद्ध कथा के पात्र हैं ? 1

उत्तर - \_\_\_\_\_

प्रश्न 4. खिलौनेवाला कविता के कवि का नाम लिखो । 1

उत्तर - \_\_\_\_\_

प्रश्न 5. ग़लत लिखे शब्दों को शुद्ध करके लिखो । 1

रूठगा \_\_\_\_\_ सिल्कार \_\_\_\_\_

प्रश्न 6. रेखांकित हिस्सों को देखकर लिखो कि शब्द संज्ञा है या क्रिया । 1

1. नमिता को बोलनेवाली गुड़िया चाहिए । \_\_\_\_\_

2. दाढ़ीवाला आदमी कहाँ है ? \_\_\_\_\_

प्रश्न 7. पशु पक्षियों से तुलना करते हुए कोई दो उदाहरण लिखो । 1

उत्तर 1. -----

2 . -----

प्रश्न 8. माँ के अलावा घर में और कौन-कौन हैं जो तुम्हें मनाते हैं ? 1

उत्तर -----

प्रश्न 9. निम्नलिखित जातिवाचक संज्ञा शब्दों के लिए दो - दो व्यक्तिवाचक संज्ञा शब्द लिखो । 2

भोजन - -----

धातु - -----

प्रश्न 10. किन्हीं चार अनाजों के नाम लिखो । 2

उत्तर - -----

प्रश्न 11. निम्नलिखित वाक्यों को अपने शब्दों में लिखो । 2

1 - उनकी अपनी चालाकी धरी रह गई ।

उत्तर - -----

2 - “आज ई लोग के उठे के नईखे का ?”

उत्तर - -----



प्रश्न 12. शब्दों के अर्थ लिखो ।

2

प्रस्ताव = .....

बोरसी = .....

चाँपाकल = .....

तल्खी = .....

प्रश्न 13. निम्नलिखित मुहावरों का अर्थ लिखो ।

2

1 - नहले पर दहला - .....

2 - तुम सेर में सवा सेर - .....

प्रश्न 14. निम्नलिखित प्रान्तों में मनाए जाने वाले फसलों से जुड़े त्योहारों के नाम

लिखो ।

2

झारखंड - .....

तमिलनाडु - .....

केरल - .....

असम - .....

प्रश्न 15. कविता की वह पंक्तियाँ लिखो जिनमें नीचे लिखे भाव आये हो ।

2

1 - खिलौनेवाला साड़ी नहीं बेचता है ।

उत्तर - .....

2 - माँ के बिना कौन मनाएगा और कौन गोद में बिठाएगा ।

उत्तर - .....

प्रश्न 16. सही क्रिया शब्द भरकर वाक्य पूरा करो ।

2

माताजी ने दाल - चावल ----- लेकिन उसमे नमक ----- भूल  
गई । रीता ने माताजी से ----- । सबने मिलकर दाल - चावल ----- ।

प्रश्न 17. निम्न कामों में काम आने वाले औजारों के नाम लिखो ।

2

1 - बढईगिरि - -----

2 - नक्काशी - -----

प्रश्न 18. “माशा अल्लाह ! ये घंटियाँ कितनी सुन्दर हैं ! तुमने खुद बनाई हैं?”

बादशाह अकबर ने यह बात किसलिए कही होगी ?

2

उत्तर - -----

-----  
-----  
-----  
-----

प्रश्न 19. निम्नलिखित संज्ञाएँ किन क्रिया शब्दों से बनी हैं ?

2

1. पड़ाव - -----

2. बहाव - -----

3. चुनाव - -----

4. लगाव - -----

प्रश्न 20. दिए गए शब्दों का वाक्य बनाकर अंतर स्पष्ट करो ।

2

फुसफुसाना - -----

बड़बड़ाना - -----

प्रश्न 21. "राख की रस्सी" पाठ में आई लड़की को तुम समझदार कहोगे या बुद्धिमान ?

क्यों ?

2

उत्तर -

प्रश्न 22. सही वाक्य पर ( ✓ ) का और गलत वाक्य पर ( X ) का निशान लगाओ।

2

1. लोनपो गार सौनगवसैन गांपो के मंत्री थे ।

2. सरहुल के अवसर पर कानों में सरई के फूल पहना जाता है ।

3. बालक के रूठने पर उसकी माँ उसे नहीं मनाती।

4. अकबर सीकरी में एक कारखाना स्थापित करना चाहते थे ।

प्रश्न 23. लिखे गए त्योहारों से जुड़ी सही वस्तु तक मिलान करो ।

2

मकर-संक्रांति

पकवानों की माला

पोंगल

सरई

घुघुतिया

पतंग

सरहुल

साबुत हल्दी

प्रश्न 24. एक शब्द में उत्तर लिखो ।

2

1. केशव मूल रूप से कहाँ का रहने वाला था ?

उत्तर - .....

2. ताड़का का वध किसने किया था ?


उत्तर - .....

3. तिलकुट किन चीजों से बनाया जाता है ?

उत्तर - .....

4. भेड़ों के बाल बेचकर लड़की ने क्या खरीदा ?

उत्तर - .....



**ATOMIC ENERGY CENTRAL SCHOOL No.-4, RAWATBHATA**

**Periodic Test – 1 (2018-19)**

**Subject : Maths**

**Class – V**

**Section : \_\_\_\_\_**

**Date: 17/07/2018**

**Name of the student : \_\_\_\_\_**

**Roll No: \_\_\_\_\_**

**Invigilator's sign: \_\_\_\_\_**

**Time -  $1\frac{1}{2}$  Hours**

**Examiner's sign: \_\_\_\_\_**

**MM : 40 MO : \_\_\_\_\_**

**Q1.Fill in the blanks.**

**6 marks**

- a) At 2: 30 the hands of the clock makes \_\_\_\_\_ angle.
- b) If the speed of a car is 30 km/hr. it will go \_\_\_\_\_ km in 5 hours.
- c) 1 crore = \_\_\_\_\_ lakhs.
- d) The measure of right angle is \_\_\_\_\_ .
- e) We use a \_\_\_\_\_ to measure angle.
- f) A rectangle has all \_\_\_\_\_ angles.

**Q2. Write 'True' or 'False'.**

**2 marks**

- a) One fifth of 4500 kg of fish is 900 kg. [            ]
- b) Angle between Index finger and middle finger is more than a right angle. [            ]
- c) The shape of a figure remain same if we change the angles. [            ]
- d) A triangle has five angles. [            ]

**Q3. Do as directed.**

**14 marks**

a) Amit sold a big watermelon of 12 kg for Rs. 336. At what price did he sell the 1 kg watermelon?

b) Dimple took a loan of Rs 75000 to buy a LED T.V. She paid back Rs. 7200 per month for 1 year. How much money did she pay back after 1 year?

c) Write the number of different type of angles of the given name

**A                      A                      H**

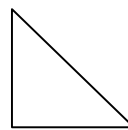
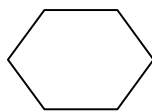
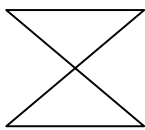
More than right angle	Less than right angle	right angle

d) Sangita sold the prawns for Rs 150 per kg.

Sarita sold the 20 kg kingfish for Rs. 1800.

- Sangita has sold 5 kg prawns today. How much money did she get for that?
  
- At what price Sarita sold per kg kingfish ?

e) Mark the angles which are less than right angle in the following figures.



f) Draw the following angles.

65°

120°

g) Draw a shape using 5 square of 1 cm each and write its area and perimeter.

**Q3(a) What type of angle is formed at these times? Also write the time. (8)**






\_\_\_\_\_

\_\_\_\_\_







\_\_\_\_\_

\_\_\_\_\_

**b) Here is a rectangle of area 24 sq.cm. Draw two straight lines in this rectangle to divide it into one rectangle and two equal triangles.**



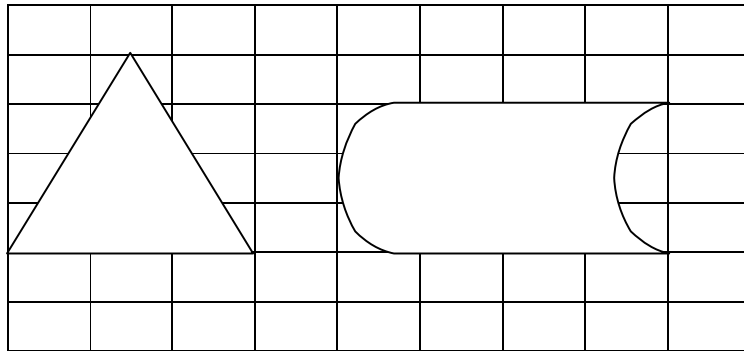
**(a) What is the area of the small rectangle?**

**(b) What is the area of each triangle?**

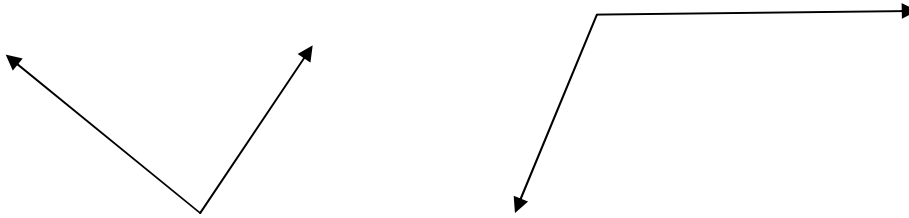
**Q4. Do as directed.**

**(10)**

a) Write the area of the shaded part in given shapes.



b) Measure the given angles.




e) Write in words.

1,25,08,030- \_\_\_\_\_  
\_\_\_\_\_

f) A log boat travels about 4 km in 1 hour. How long will it take to go to a distance of 26 km.

g) Draw the hands of the clock when they make an angle which is more than right angle. Also write the time.



\_\_\_\_\_





# ATOMIC ENERGY CENTRAL SCHOOL No.-4, RAWATBHATA

## Periodic Test – 1 (2018-19)

### Subject : EVS

Class – V

Section : \_\_\_\_\_

Date: 18/07/2018

Name of the student : \_\_\_\_\_

Roll No: \_\_\_\_\_

Invigilator's sign: \_\_\_\_\_

Time -  $1\frac{1}{2}$  Hours

Examiner's sign: \_\_\_\_\_

MM : 40 MO : \_\_\_\_\_

Q.1 Choose the correct word and fill in the blanks.  $\frac{1}{2} \times 10 = 5$

- (a) \_\_\_\_\_ can find us by the smell of our body. (Mosquitoes / Eagle)
- (b) Seeds can spread through \_\_\_\_\_. (air/ fire)
- (c) \_\_\_\_\_ can not see many colours like us. (Animals/Human)
- (d) Air and water are essential for \_\_\_\_\_ germination. (seeds / food)
- (e) Snake charmer use \_\_\_\_\_ Basket to keep their snakes.  
(bamboo / iron)
- (f) Food items get \_\_\_\_\_ due to different reasons.(spoil / flowed)
- (g) Snakes help human by \_\_\_\_\_ rats in fields which spoil the crops.  
(eating / play)
- (h) Spoil food have \_\_\_\_\_ smell. (bad / good)
- (i) \_\_\_\_\_ are used to make mamidi tandra. (mangoes / apple)
- (j) Digestion of food is faster in the \_\_\_\_\_ than outside. (inside / most )

Q.2 Match the correct pairs of given below food items and simple methods by which these can be fresh for 1-2 days.  $\frac{1}{2} \times 4 = 2$

- |                      |  |
|----------------------|--|
| (a) Milk             | 1. Keep it in a day open place.                                    |
| (b) Cooked rice      | 2. Boil it.  |
| (c) Green coriander. | 3. Put in a bowl and keep the bowl in a container with some water. |
| (d) Onion, garlic.   | 4. Wrap in a damp cloth  |

Q.3 Name two examples.

1×15=15

(a) Special sense of smell of dogs is used by human

\_\_\_\_\_

(b) We can recognise the smell of many things such as

\_\_\_\_\_

(c) Food items that having taste sour

\_\_\_\_\_

(d) Thing are soaked before cooking in home

\_\_\_\_\_

(e) We get information from the food packets

\_\_\_\_\_

(f) Some type of pickle

\_\_\_\_\_

(g) Excess water of our body is removed in the form

\_\_\_\_\_

(h) Can get spoilt in 2-3 days

\_\_\_\_\_

(i) Different ways by which seeds are spread

\_\_\_\_\_

(j) Things that made of ripe Mangoes

\_\_\_\_\_

(k) People depend on animals

\_\_\_\_\_

(i) Seeds that are used as spices in home

\_\_\_\_\_

(m) Inside the seed

\_\_\_\_\_

(n) Some plants grow without seeds

\_\_\_\_\_

(o) Things we eat after sprouting

\_\_\_\_\_

Q.4 Write true or false.

1X3=3

- a) Snakes dance when the been moves. \_\_\_\_\_
- b) Gopal's mother tie the chana in a damp cloth . \_\_\_\_\_
- c) Tomato taste is sweet and sour with juicy. \_\_\_\_\_

Q.5 Name the following-

1X3=3

- 1. It looks like a bear. It spends almost 17 hours a day sleeping while hanging upside down on a tree branch. \_\_\_\_\_
- 2. Senses beyond the normal range of senses. \_\_\_\_\_
- 3. The musical instrument used by kalbeliyas. \_\_\_\_\_

Q3 Answer the following questions.

2X6=12

a) How did the ant know that the other ants were not from it's group?

Ans. \_\_\_\_\_  
\_\_\_\_\_  
\_\_\_\_\_

b) How does a big plant grow from a tiny seed?

Ans. \_\_\_\_\_  
\_\_\_\_\_  
\_\_\_\_\_

c) Why was the sugar and jaggery mixed into the mango pulp and dried in the sun?

Ans. \_\_\_\_\_  
\_\_\_\_\_  
\_\_\_\_\_

d) Why dogs are sniffing here and there?

Ans. \_\_\_\_\_  
\_\_\_\_\_  
\_\_\_\_\_

e) What would happen if the plants do not get water?

Ans. \_\_\_\_\_  
\_\_\_\_\_  
\_\_\_\_\_

f) How did Aman know that the potato sabzi had got spoilt?

Ans. \_\_\_\_\_  
\_\_\_\_\_  
\_\_\_\_\_